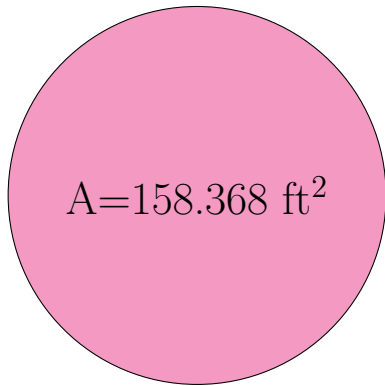
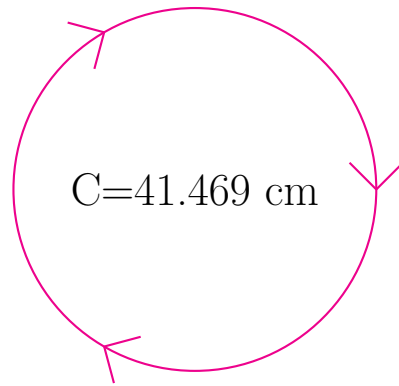


Radius and Diameter of Circles (D)

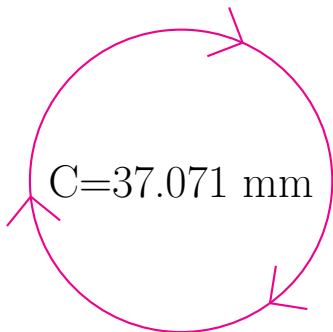
Calculate the radius and diameter of each circle.



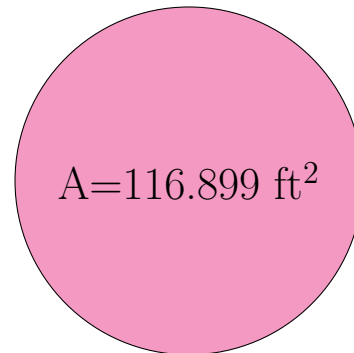
radius = _____
diameter = _____



radius = _____
diameter = _____



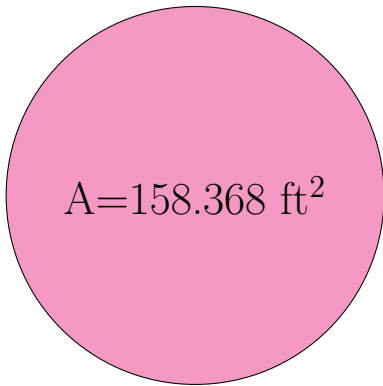
radius = _____
diameter = _____



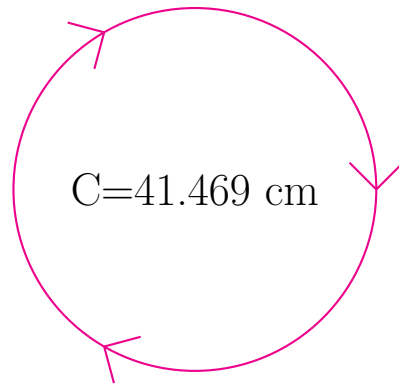
radius = _____
diameter = _____

Radius and Diameter of Circles (D) Answers

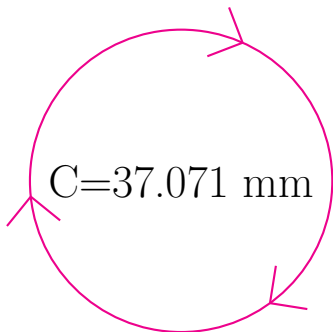
Calculate the radius and diameter of each circle.



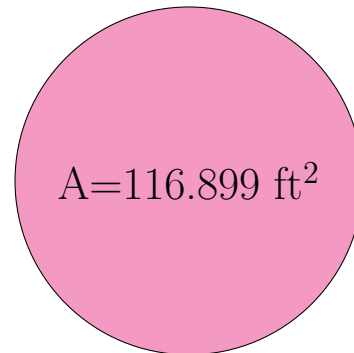
$$\begin{aligned} \text{radius} &= \underline{7.1 \text{ ft}} \\ \text{diameter} &= \underline{14.2 \text{ ft}} \end{aligned}$$



$$\begin{aligned} \text{radius} &= \underline{6.6 \text{ cm}} \\ \text{diameter} &= \underline{13.2 \text{ cm}} \end{aligned}$$



$$\begin{aligned} \text{radius} &= \underline{5.9 \text{ mm}} \\ \text{diameter} &= \underline{11.8 \text{ mm}} \end{aligned}$$



$$\begin{aligned} \text{radius} &= \underline{6.1 \text{ ft}} \\ \text{diameter} &= \underline{12.2 \text{ ft}} \end{aligned}$$