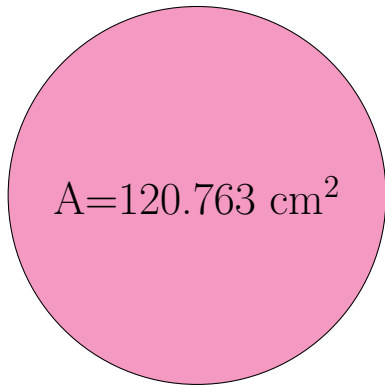
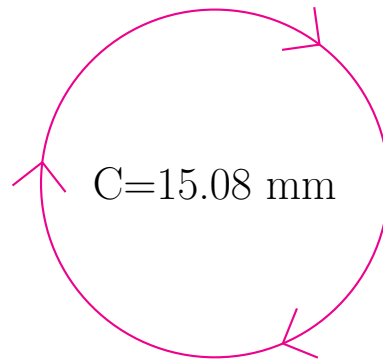


## Radius and Diameter of Circles (G)

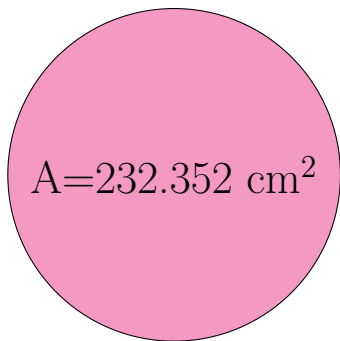
Calculate the radius and diameter of each circle.



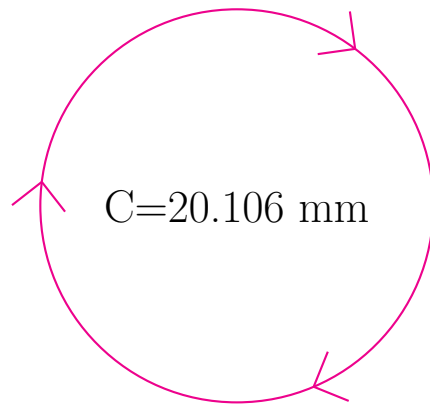
radius = \_\_\_\_\_  
diameter = \_\_\_\_\_



radius = \_\_\_\_\_  
diameter = \_\_\_\_\_



radius = \_\_\_\_\_  
diameter = \_\_\_\_\_



radius = \_\_\_\_\_  
diameter = \_\_\_\_\_