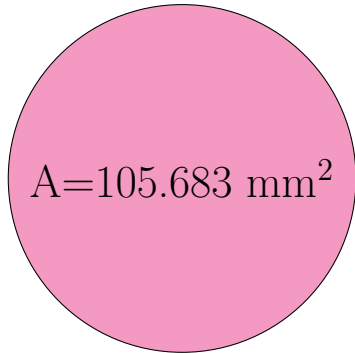
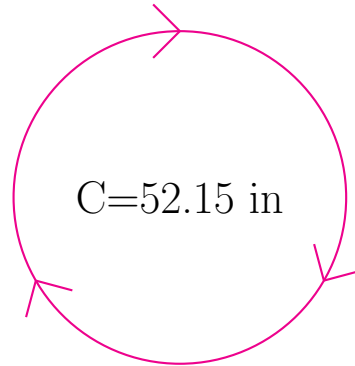


Radius and Diameter of Circles (I)

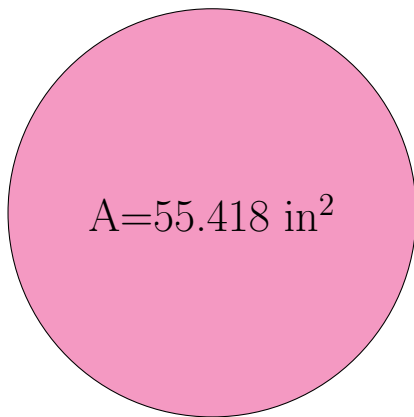
Calculate the radius and diameter of each circle.



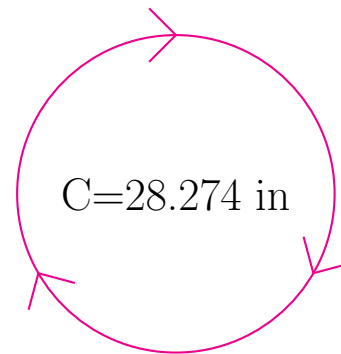
radius = _____
diameter = _____



radius = _____
diameter = _____



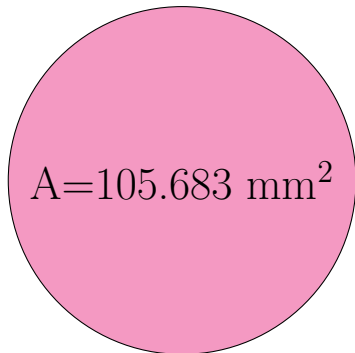
radius = _____
diameter = _____



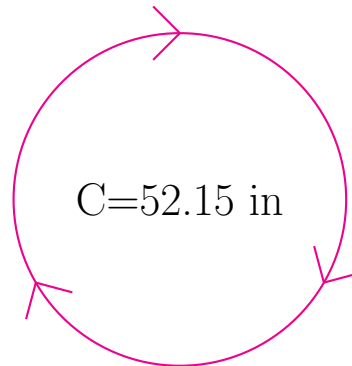
radius = _____
diameter = _____

Radius and Diameter of Circles (I) Answers

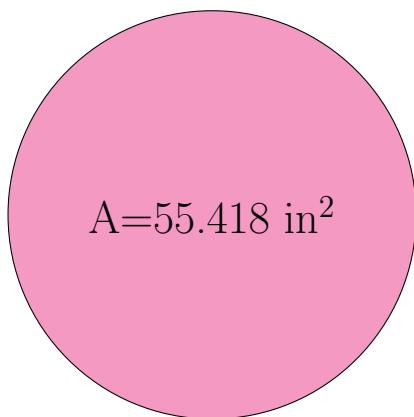
Calculate the radius and diameter of each circle.



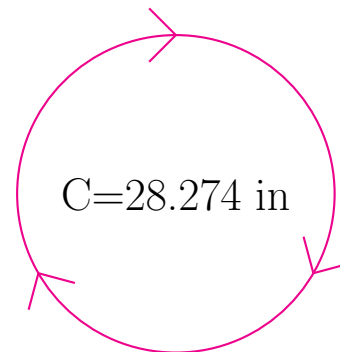
radius = 5.8 mm
diameter = 11.6 mm



radius = 8.3 in
diameter = 16.6 in



radius = 4.2 in
diameter = 8.4 in



radius = 4.5 in
diameter = 9.0 in