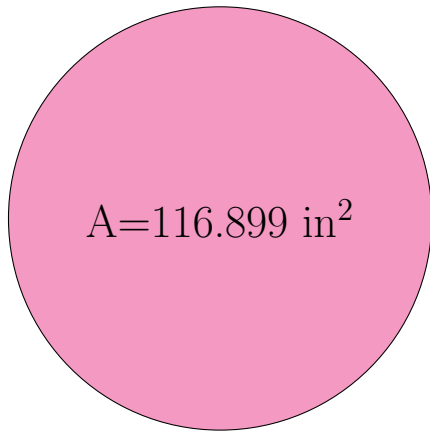


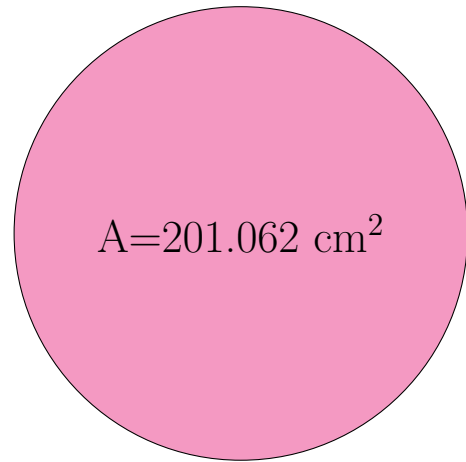
## Radius and Diameter of Circles (J)

Calculate the radius and diameter of each circle.



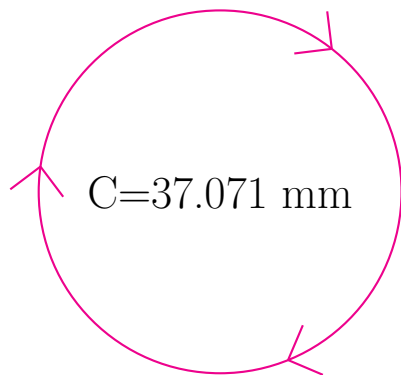
radius = \_\_\_\_\_

diameter = \_\_\_\_\_



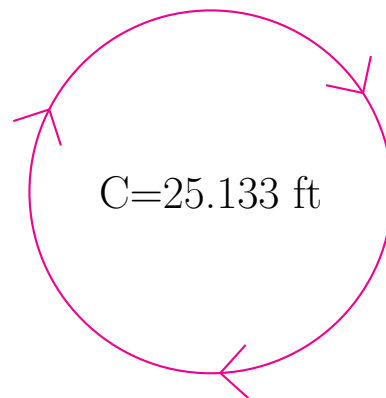
radius = \_\_\_\_\_

diameter = \_\_\_\_\_



radius = \_\_\_\_\_

diameter = \_\_\_\_\_

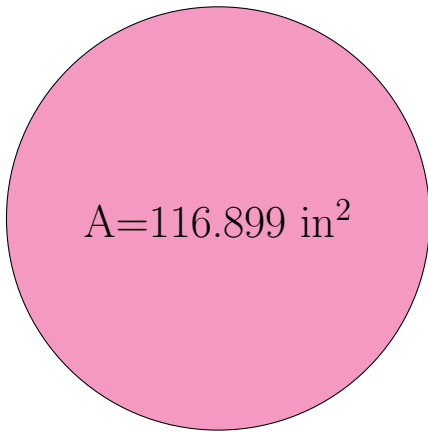


radius = \_\_\_\_\_

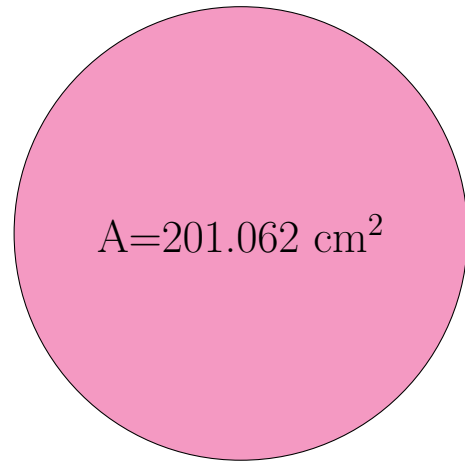
diameter = \_\_\_\_\_

## Radius and Diameter of Circles (J) Answers

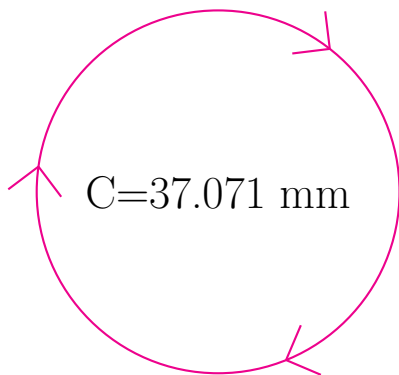
Calculate the radius and diameter of each circle.



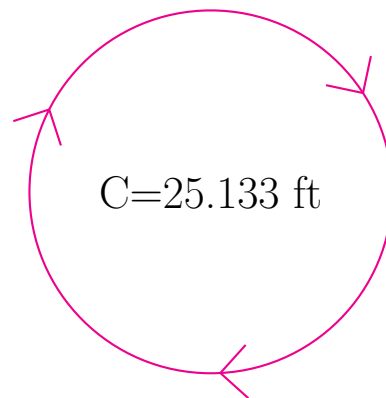
radius = 6.1 in  
diameter = 12.2 in



radius = 8.0 cm  
diameter = 16.0 cm



radius = 5.9 mm  
diameter = 11.8 mm



radius = 4.0 ft  
diameter = 8.0 ft