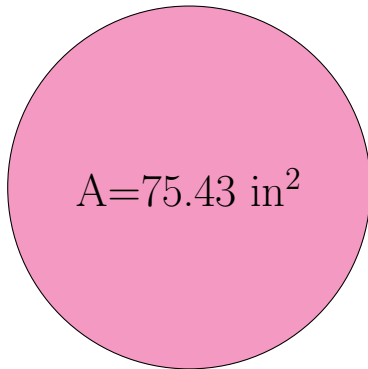


Radius and Diameter of Circles (A)

Calculate the radius and diameter of each circle.



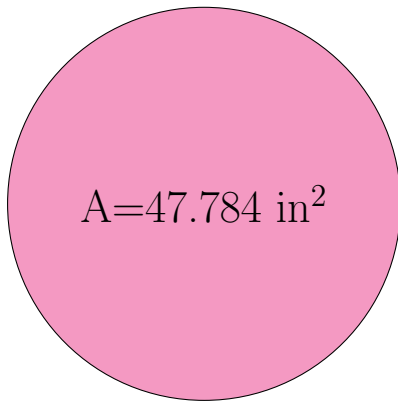
radius = _____

diameter = _____



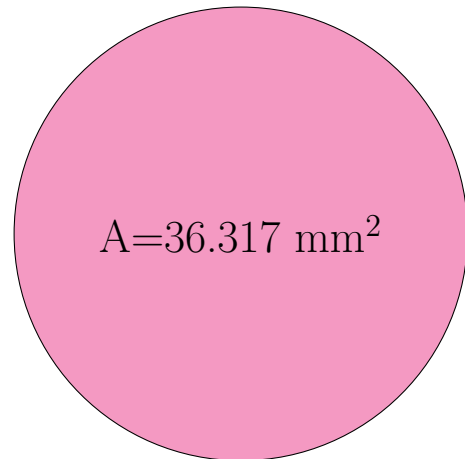
radius = _____

diameter = _____



radius = _____

diameter = _____

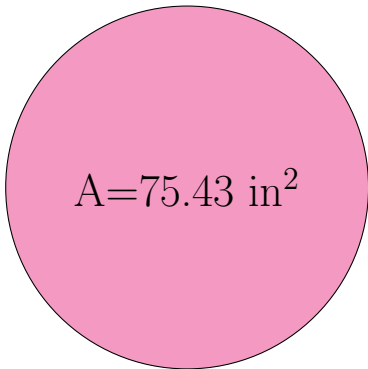


radius = _____

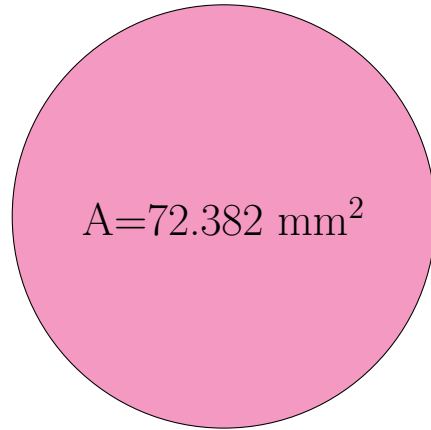
diameter = _____

Radius and Diameter of Circles (A) Answers

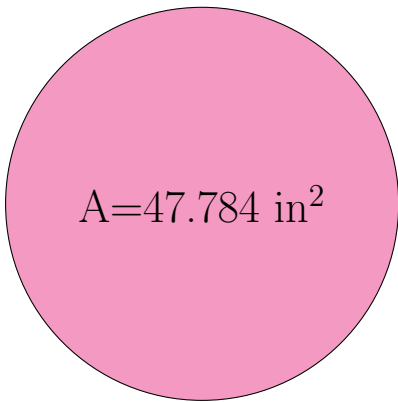
Calculate the radius and diameter of each circle.



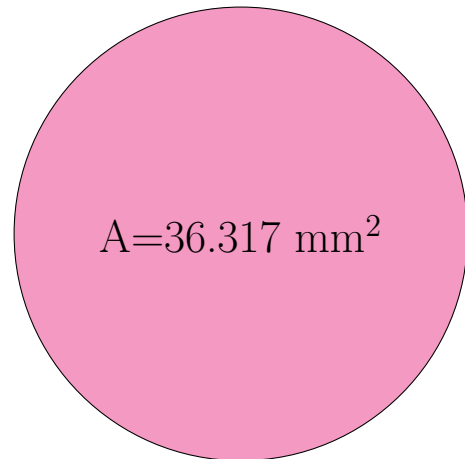
$$\begin{aligned} \text{radius} &= \underline{4.9 \text{ in}} \\ \text{diameter} &= \underline{9.8 \text{ in}} \end{aligned}$$



$$\begin{aligned} \text{radius} &= \underline{4.8 \text{ mm}} \\ \text{diameter} &= \underline{9.6 \text{ mm}} \end{aligned}$$



$$\begin{aligned} \text{radius} &= \underline{3.9 \text{ in}} \\ \text{diameter} &= \underline{7.8 \text{ in}} \end{aligned}$$



$$\begin{aligned} \text{radius} &= \underline{3.4 \text{ mm}} \\ \text{diameter} &= \underline{6.8 \text{ mm}} \end{aligned}$$