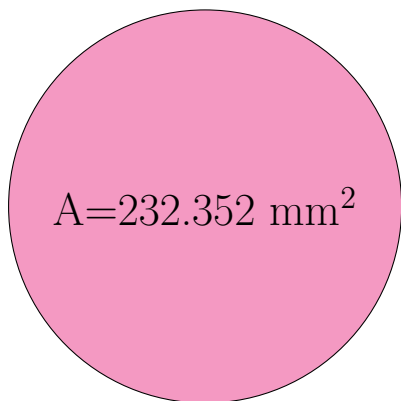


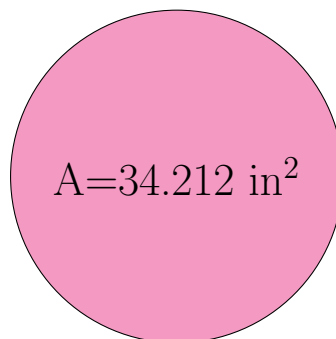
Radius and Diameter of Circles (E)

Calculate the radius and diameter of each circle.



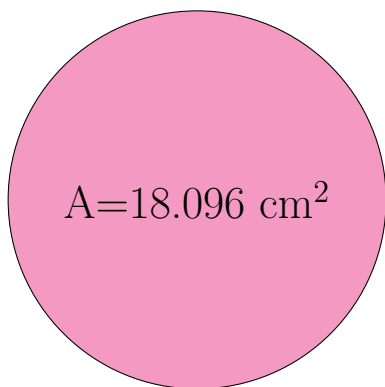
radius = _____

diameter = _____



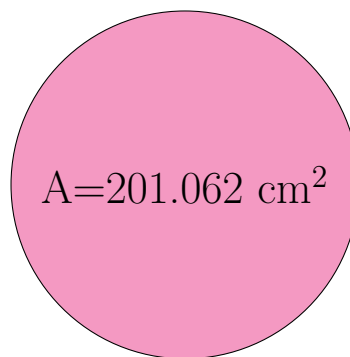
radius = _____

diameter = _____



radius = _____

diameter = _____

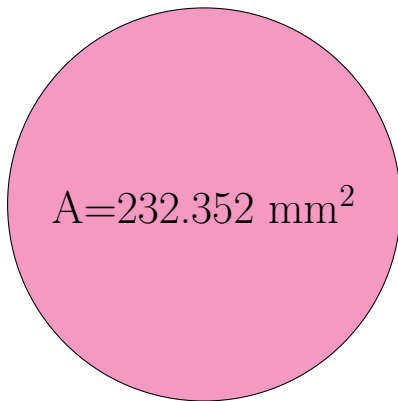


radius = _____

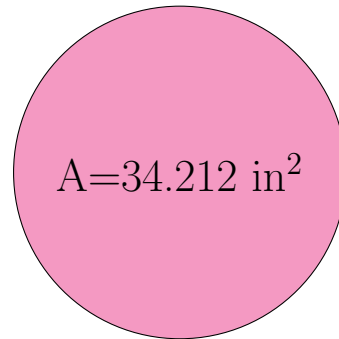
diameter = _____

Radius and Diameter of Circles (E) Answers

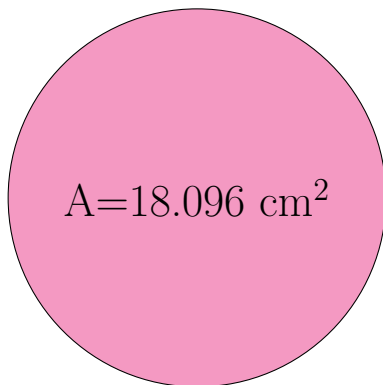
Calculate the radius and diameter of each circle.



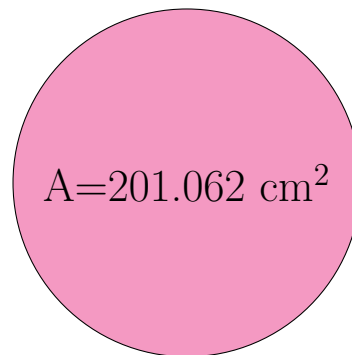
$$\begin{aligned} \text{radius} &= \underline{8.6 \text{ mm}} \\ \text{diameter} &= \underline{17.2 \text{ mm}} \end{aligned}$$



$$\begin{aligned} \text{radius} &= \underline{3.3 \text{ in}} \\ \text{diameter} &= \underline{6.6 \text{ in}} \end{aligned}$$



$$\begin{aligned} \text{radius} &= \underline{2.4 \text{ cm}} \\ \text{diameter} &= \underline{4.8 \text{ cm}} \end{aligned}$$



$$\begin{aligned} \text{radius} &= \underline{8.0 \text{ cm}} \\ \text{diameter} &= \underline{16.0 \text{ cm}} \end{aligned}$$