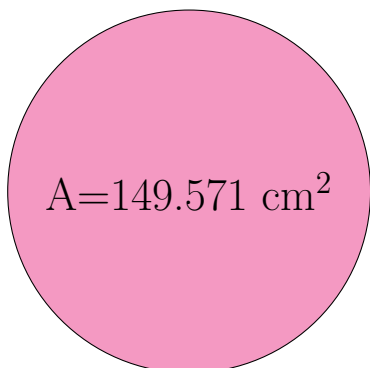


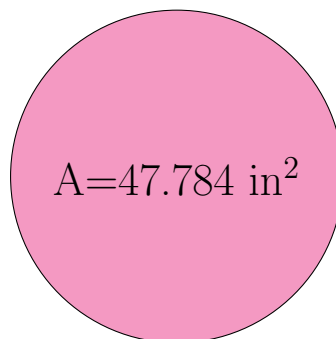
Radius and Diameter of Circles (F)

Calculate the radius and diameter of each circle.



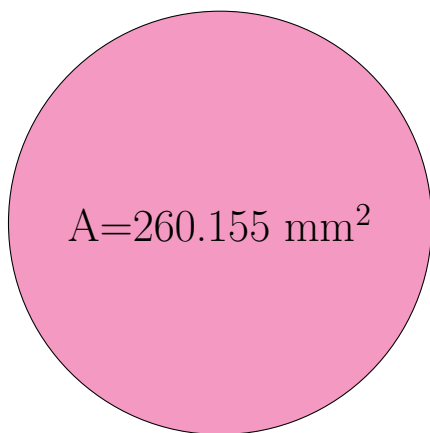
radius = _____

diameter = _____



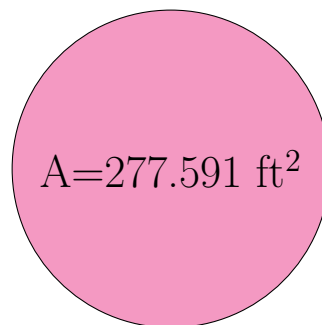
radius = _____

diameter = _____



radius = _____

diameter = _____

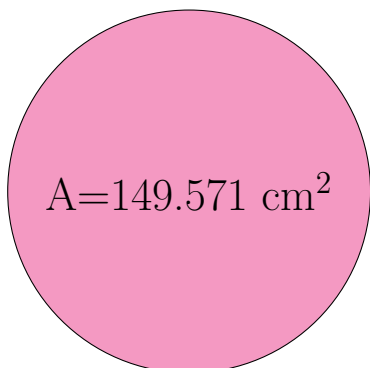


radius = _____

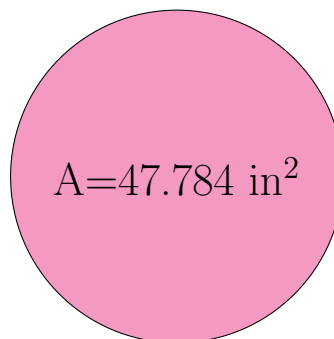
diameter = _____

Radius and Diameter of Circles (F) Answers

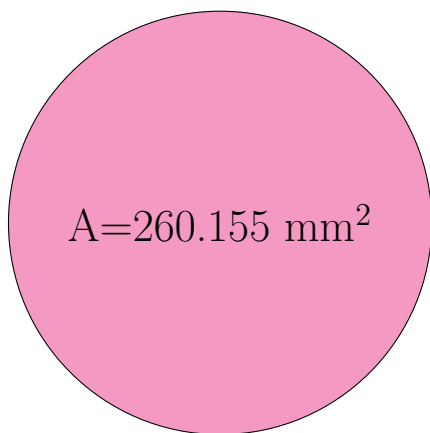
Calculate the radius and diameter of each circle.



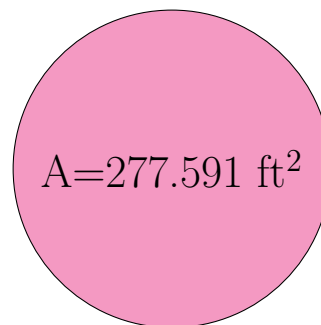
$$\begin{array}{l} \text{radius} = \underline{6.9 \text{ cm}} \\ \text{diameter} = \underline{13.8 \text{ cm}} \end{array}$$



$$\begin{array}{l} \text{radius} = \underline{3.9 \text{ in}} \\ \text{diameter} = \underline{7.8 \text{ in}} \end{array}$$



$$\begin{array}{l} \text{radius} = \underline{9.1 \text{ mm}} \\ \text{diameter} = \underline{18.2 \text{ mm}} \end{array}$$



$$\begin{array}{l} \text{radius} = \underline{9.4 \text{ ft}} \\ \text{diameter} = \underline{18.8 \text{ ft}} \end{array}$$