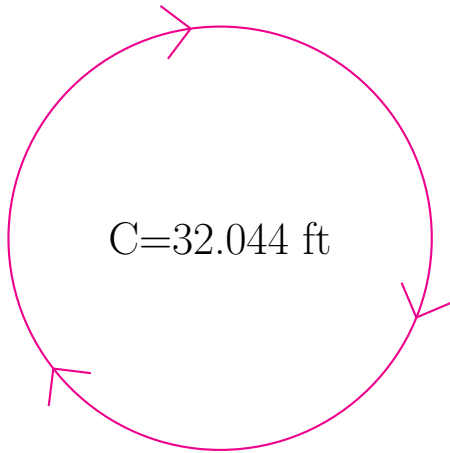
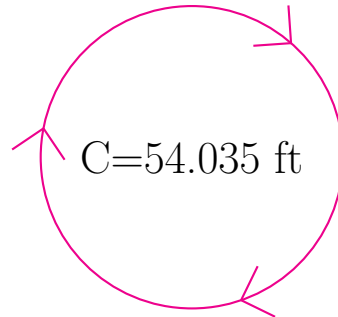


Radius and Diameter of Circles (G)

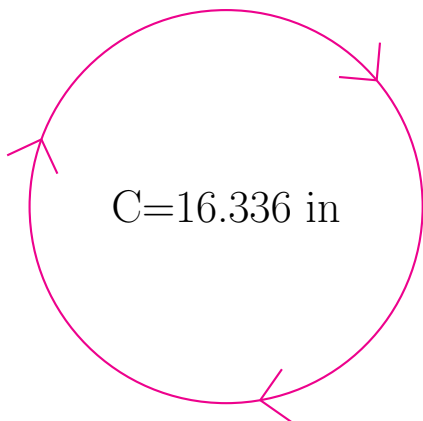
Calculate the radius and diameter of each circle.



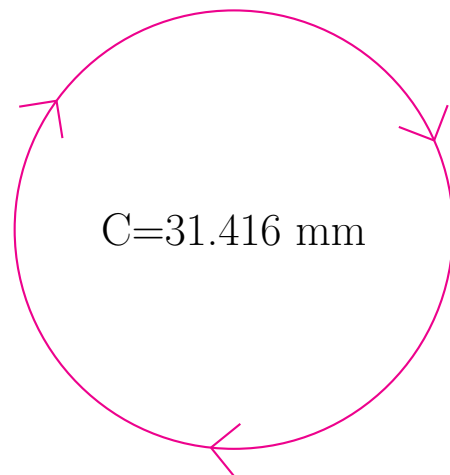
radius = _____
diameter = _____



radius = _____
diameter = _____



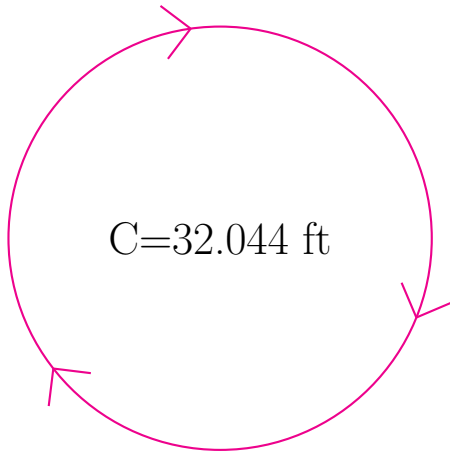
radius = _____
diameter = _____



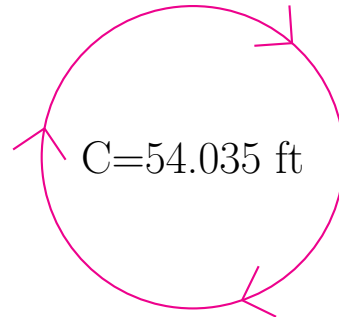
radius = _____
diameter = _____

Radius and Diameter of Circles (G) Answers

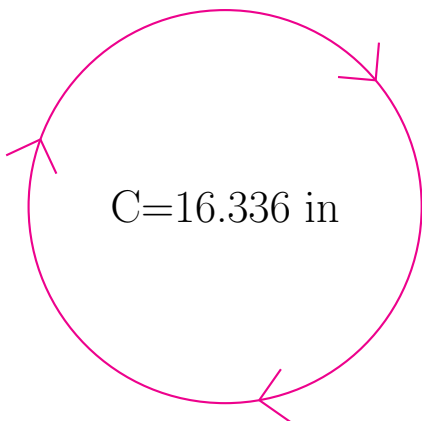
Calculate the radius and diameter of each circle.



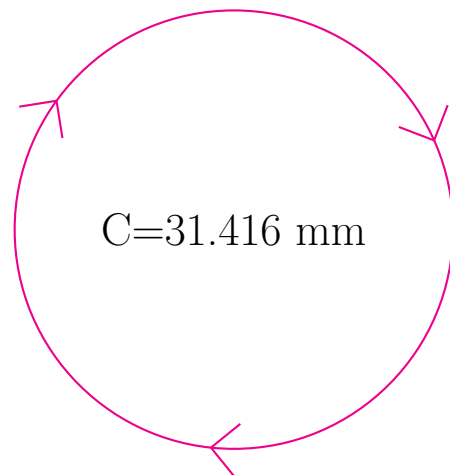
$$\begin{aligned} \text{radius} &= \underline{5.1 \text{ ft}} \\ \text{diameter} &= \underline{10.2 \text{ ft}} \end{aligned}$$



$$\begin{aligned} \text{radius} &= \underline{8.6 \text{ ft}} \\ \text{diameter} &= \underline{17.2 \text{ ft}} \end{aligned}$$



$$\begin{aligned} \text{radius} &= \underline{2.6 \text{ in}} \\ \text{diameter} &= \underline{5.2 \text{ in}} \end{aligned}$$



$$\begin{aligned} \text{radius} &= \underline{5.0 \text{ mm}} \\ \text{diameter} &= \underline{10.0 \text{ mm}} \end{aligned}$$