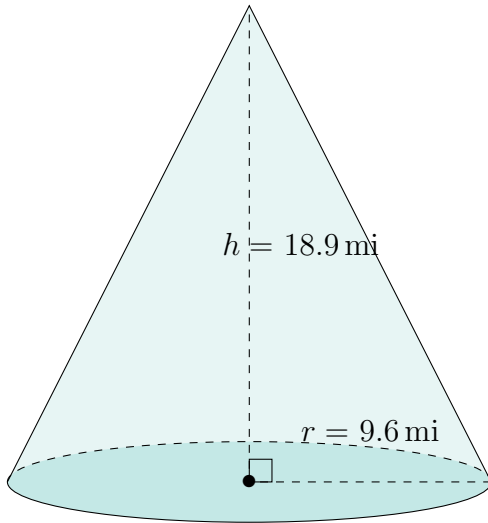


# Surface Area and Volume of Cones (A)

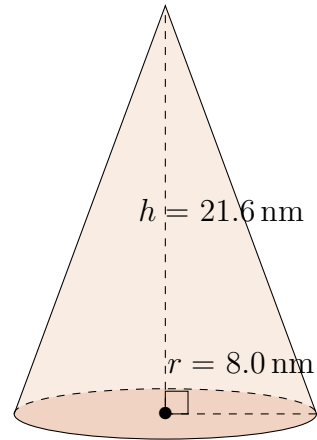
Calculate the surface area and volume for each cone.

$$\text{Surface Area} = \pi r(r + \sqrt{h^2 + r^2}) \quad \text{Volume} = \pi r^2 \frac{h}{3}$$

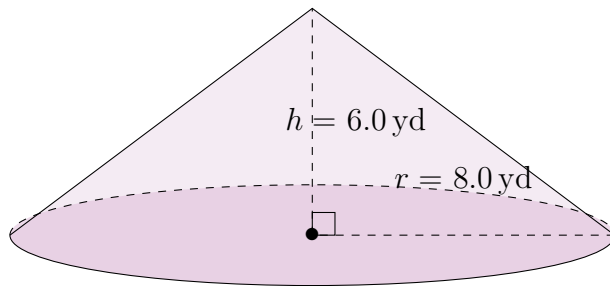
1.



2.



3.



4.

