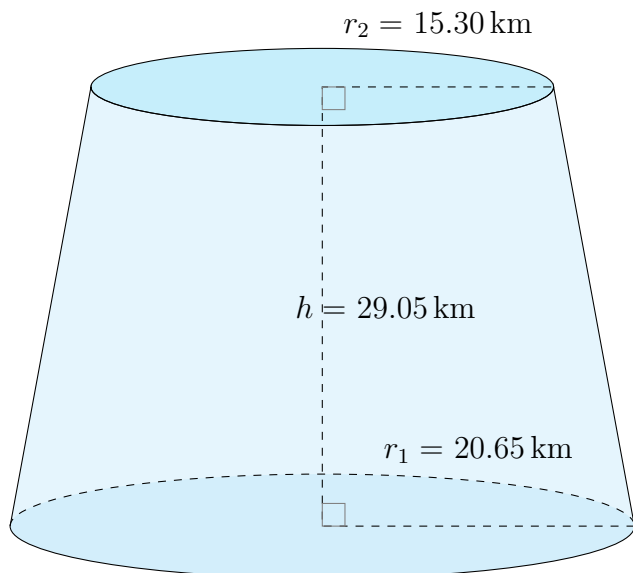


Surface Area and Volume of Conical Frustums (D)

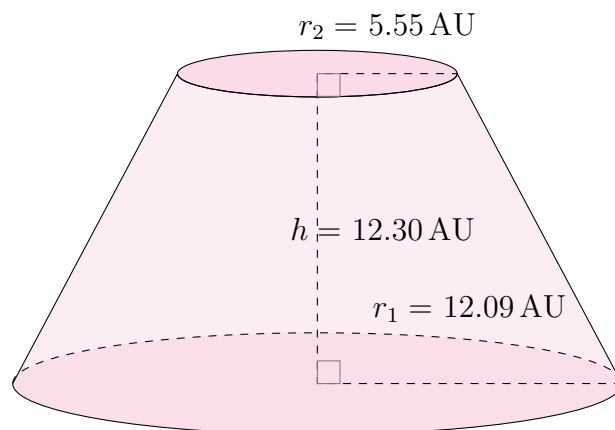
Calculate the surface area and volume for each conical frustum.

$$\text{Surface Area} = \pi(r_1 + r_2)\sqrt{(r_1 - r_2)^2 + h^2} + \pi r_1^2 + \pi r_2^2 \quad \text{Volume} = \frac{\pi}{3}h(r_1^2 + r_2^2 + r_1 r_2)$$

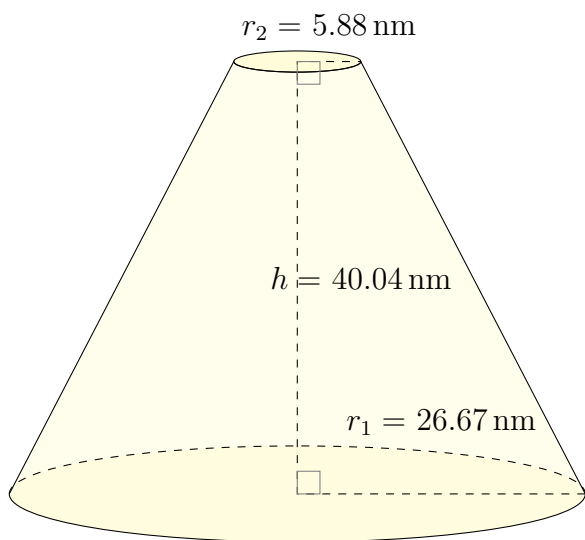
1.



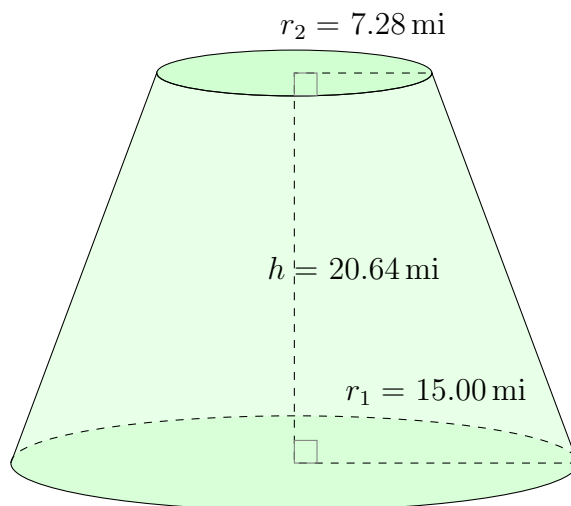
2.



3.



4.

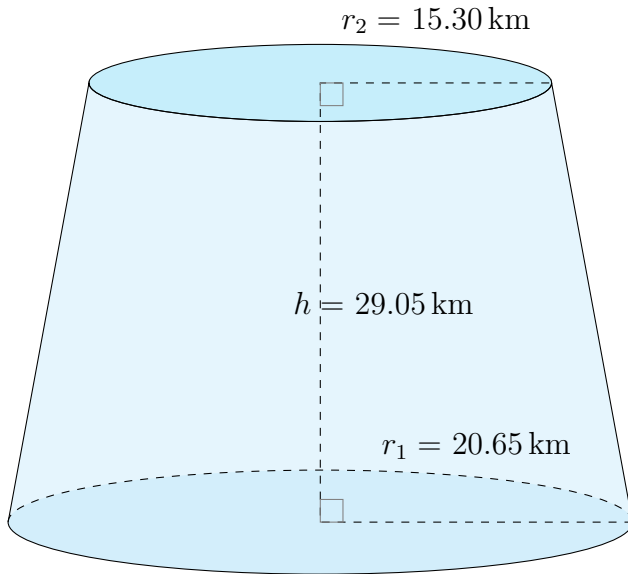


Surface Area and Volume of Conical Frustums (D) Answers

Calculate the surface area and volume for each conical frustum.

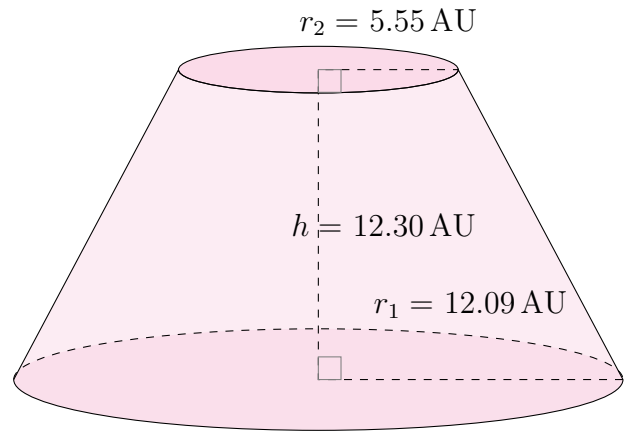
$$\text{Surface Area} = \pi(r_1 + r_2)\sqrt{(r_1 - r_2)^2 + h^2} + \pi r_1^2 + \pi r_2^2 \quad \text{Volume} = \frac{\pi}{3}h(r_1^2 + r_2^2 + r_1 r_2)$$

1.



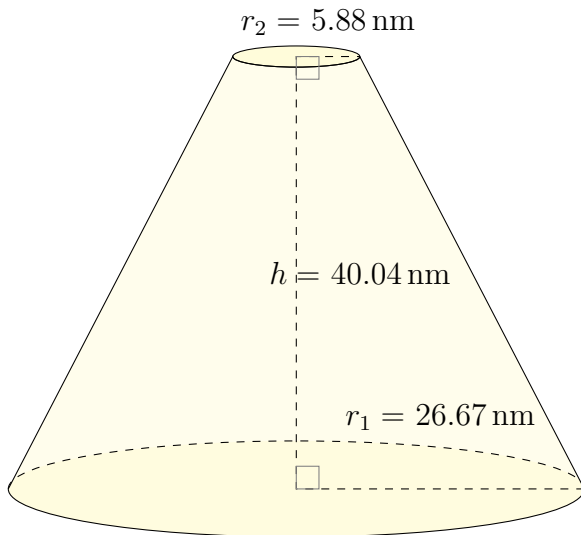
Surface Area: 5411.15 km²
Volume: 29,704.90 km³

2.



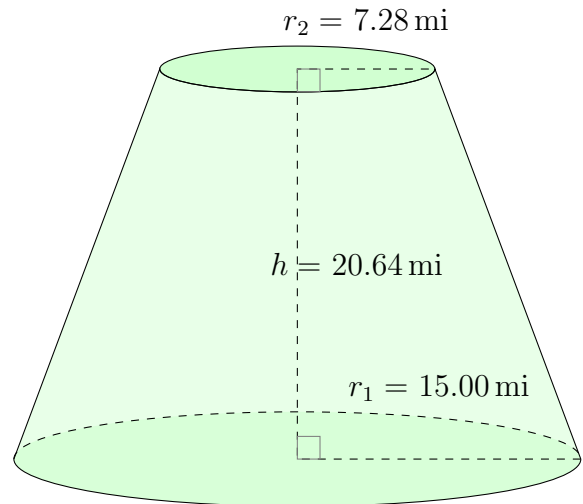
Surface Area: 1327.97 AU²
Volume: 3143.75 AU³

3.



Surface Area: 6956.68 nm²
Volume: 37,849.30 nm³

4.



Surface Area: 2415.80 mi²
Volume: 8368.97 mi³