

Measuring Length (I)

Name: _____

Date: _____

Score: _____

Measure the length of each bar **to the nearest eighth inch**.


1.

Bar length:




2.

Bar length:




3.

Bar length:



4.

Bar length:



5.

Bar length:




6.

Bar length:




7.

Bar length:



8.

Bar length:




9.

Bar length:



10.

Bar length:



Measuring Length (I) Answers

Name: _____

Date: _____

Score: _____

Measure the length of each bar **to the nearest eighth inch**.

1.

Bar length:



2.

Bar length:




3.

Bar length:




4.

Bar length:



5.

Bar length:



6.

Bar length:



7.

Bar length:



8.

Bar length:



9.

Bar length:



10.

Bar length:

