

# Measuring Length (I)

Name: \_\_\_\_\_

Date: \_\_\_\_\_

Score: \_\_\_\_\_

Measure the length of each bar **to the nearest eighth inch**.

1.

Bar length:



2.

Bar length:




3.

Bar length:



4.

Bar length:



5.

Bar length:




6.

Bar length:




7.

Bar length:



8.

Bar length:



9.

Bar length:



10.

Bar length:

