


Measuring in Centimeters (A)

Measure each bar to the nearest half centimeter



Measuring in Centimeters (A) Answers

Measure each bar to the nearest half centimeter



4.5 cm




2.5 cm




7 cm



2.5 cm



4 cm



12.5 cm



9.5 cm



10 cm



0.5 cm



14 cm