

Measuring Length (I)

Name: _____ Date: _____ Score: _____

Measure the length of each bar **to the nearest half centimeter**.

1.

Bar length:




2.

Bar length:



3.

Bar length:




4.

Bar length:



5.

Bar length:



6.

Bar length:



7.

Bar length:



8.

Bar length:



9.

Bar length:



10.

Bar length:



Measuring Length (I) Answers

Name: _____ Date: _____ Score: _____

Measure the length of each bar **to the nearest half centimeter**.

1.

Bar length: 8 cm




2.

Bar length: 6 cm




3.

Bar length: 4.5 cm



4.

Bar length: 12.5 cm



5.

Bar length: 15 cm




6.

Bar length: 9.5 cm




7.

Bar length: 5.5 cm



8.

Bar length: 10 cm



9.

Bar length: 7 cm



10.

Bar length: 14 cm

