

Measuring Length (A)

Name: _____

Date: _____

Score: _____

Measure the length of each bar **to the nearest half centimeter**.

1.

Bar length:



2.

Bar length:



3.

Bar length:



4.

Bar length:



5.

Bar length:



6.

Bar length:



7.

Bar length:



8.

Bar length:



9.

Bar length:



10.

Bar length:



Measuring Length (A) Answers

Name: _____ Date: _____ Score: _____

Measure the length of each bar **to the nearest half centimeter**.

1.

Bar length: 13 cm



2.

Bar length: 2.5 cm



3.

Bar length: 16.5 cm



4.

Bar length: 8.5 cm



5.

Bar length: 10 cm



6.

Bar length: 5 cm



7.

Bar length: 6 cm



8.

Bar length: 9.5 cm



9.

Bar length: 7 cm



10.

Bar length: 12 cm



Measuring Length (B)

Name: _____

Date: _____

Score: _____

Measure the length of each bar **to the nearest half centimeter**.

1.

Bar length:



2.

Bar length:



3.

Bar length:



4.

Bar length:



5.

Bar length:



6.

Bar length:



7.

Bar length:



8.

Bar length:



9.

Bar length:



10.

Bar length:



Measuring Length (B) Answers

Name: _____ Date: _____ Score: _____

Measure the length of each bar **to the nearest half centimeter**.

1.

Bar length:



2.

Bar length:



3.

Bar length:



4.

Bar length:



5.

Bar length:



6.

Bar length:



7.

Bar length:



8.

Bar length:



9.

Bar length:



10.

Bar length:



Measuring Length (C)

Name: _____

Date: _____

Score: _____

Measure the length of each bar **to the nearest half centimeter**.

1.



Bar length:

2.



Bar length:

3.



Bar length:

4.



Bar length:

5.



Bar length:

6.



Bar length:

7.



Bar length:

8.



Bar length:

9.



Bar length:

10.



Bar length:

Measuring Length (C) Answers

Name: _____

Date: _____

Score: _____

Measure the length of each bar **to the nearest half centimeter**.

1.



Bar length:

2.



Bar length:

3.



Bar length:

4.



Bar length:

5.



Bar length:

6.



Bar length:

7.



Bar length:

8.



Bar length:

9.



Bar length:

10.



Bar length:

Measuring Length (D)

Name: _____

Date: _____

Score: _____

Measure the length of each bar **to the nearest half centimeter**.

1.

Bar length:



2.

Bar length:



3.

Bar length:



4.

Bar length:



5.

Bar length:



6.

Bar length:



7.

Bar length:



8.

Bar length:



9.

Bar length:



10.

Bar length:



Measuring Length (D) Answers

Name: _____ Date: _____ Score: _____

Measure the length of each bar **to the nearest half centimeter**.

1.

Bar length: 15.5 cm



2.

Bar length: 5.5 cm



3.

Bar length: 7.5 cm



4.

Bar length: 14 cm



5.

Bar length: 10 cm



6.

Bar length: 6.5 cm



7.

Bar length: 8.5 cm



8.

Bar length: 9 cm



9.

Bar length: 3 cm



10.

Bar length: 11.5 cm



Measuring Length (E)

Name: _____

Date: _____

Score: _____

Measure the length of each bar **to the nearest half centimeter**.

1.

Bar length:



2.

Bar length:



3.

Bar length:



4.

Bar length:



5.

Bar length:



6.

Bar length:



7.

Bar length:



8.

Bar length:



9.

Bar length:



10.

Bar length:



Measuring Length (E) Answers

Name: _____ Date: _____ Score: _____

Measure the length of each bar **to the nearest half centimeter**.

1.

Bar length: 14.5 cm



2.

Bar length: 3 cm



3.

Bar length: 15.5 cm



4.

Bar length: 11 cm



5.

Bar length: 8 cm



6.

Bar length: 7 cm



7.

Bar length: 5 cm



8.

Bar length: 6.5 cm



9.

Bar length: 10 cm



10.

Bar length: 9 cm



Measuring Length (F)

Name: _____

Date: _____

Score: _____

Measure the length of each bar **to the nearest half centimeter**.

1.

Bar length:



2.

Bar length:



3.

Bar length:



4.

Bar length:



5.

Bar length:



6.

Bar length:



7.

Bar length:



8.

Bar length:



9.

Bar length:



10.

Bar length:



Measuring Length (F) Answers

Name: _____ Date: _____ Score: _____

Measure the length of each bar **to the nearest half centimeter**.

1.

Bar length: 13.5 cm



2.

Bar length: 5.5 cm



3.

Bar length: 16.5 cm



4.

Bar length: 9 cm



5.

Bar length: 12 cm



6.

Bar length: 10.5 cm



7.

Bar length: 8.5 cm



8.

Bar length: 3 cm



9.

Bar length: 6.5 cm



10.

Bar length: 7.5 cm



Measuring Length (G)

Name: _____

Date: _____

Score: _____

Measure the length of each bar **to the nearest half centimeter**.

1.

Bar length:



2.

Bar length:



3.

Bar length:



4.

Bar length:



5.

Bar length:



6.

Bar length:



7.

Bar length:



8.

Bar length:



9.

Bar length:



10.

Bar length:



Measuring Length (G) Answers

Name: _____

Date: _____

Score: _____

Measure the length of each bar **to the nearest half centimeter**.

1.

Bar length: 10.5 cm



2.

Bar length: 6 cm



3.

Bar length: 12 cm



4.

Bar length: 9 cm



5.

Bar length: 3 cm



6.

Bar length: 7.5 cm



7.

Bar length: 13 cm



8.

Bar length: 15.5 cm



9.

Bar length: 5 cm



10.

Bar length: 8.5 cm



Measuring Length (H)

Name: _____

Date: _____

Score: _____

Measure the length of each bar **to the nearest half centimeter**.

1.

Bar length:



2.

Bar length:



3.

Bar length:



4.

Bar length:



5.

Bar length:



6.

Bar length:



7.

Bar length:



8.

Bar length:



9.

Bar length:



10.

Bar length:



Measuring Length (H) Answers

Name: _____ Date: _____ Score: _____

Measure the length of each bar **to the nearest half centimeter**.

1.

Bar length: 14 cm



2.

Bar length: 11.5 cm



3.

Bar length: 9 cm



4.

Bar length: 5 cm



5.

Bar length: 3 cm



6.

Bar length: 6 cm



7.

Bar length: 15.5 cm



8.

Bar length: 7 cm



9.

Bar length: 10 cm



10.

Bar length: 8 cm



Measuring Length (I)

Name: _____

Date: _____

Score: _____

Measure the length of each bar **to the nearest half centimeter**.

1.

Bar length:




2.

Bar length:




3.

Bar length:



4.

Bar length:



5.

Bar length:




6.

Bar length:




7.

Bar length:



8.

Bar length:



9.

Bar length:



10.

Bar length:



Measuring Length (I) Answers

Name: _____ Date: _____ Score: _____

Measure the length of each bar **to the nearest half centimeter**.

1.

Bar length:




2.

Bar length:




3.

Bar length:



4.

Bar length:



5.

Bar length:




6.

Bar length:




7.

Bar length:



8.

Bar length:



9.

Bar length:



10.

Bar length:



Measuring Length (J)

Name: _____

Date: _____

Score: _____

Measure the length of each bar **to the nearest half centimeter**.

1.



Bar length:

2.



Bar length:

3.



Bar length:

4.



Bar length:

5.



Bar length:

6.



Bar length:

7.



Bar length:

8.



Bar length:

9.



Bar length:

10.



Bar length:

Measuring Length (J) Answers

Name: _____

Date: _____

Score: _____

Measure the length of each bar **to the nearest half centimeter**.

1.



Bar length:

2.



Bar length:

3.



Bar length:

4.



Bar length:

5.



Bar length:

6.



Bar length:

7.



Bar length:

8.



Bar length:

9.



Bar length:

10.



Bar length: