

# Measuring Length (A)

Name: \_\_\_\_\_

Date: \_\_\_\_\_

Score: \_\_\_\_\_

Measure the length of each bar **to the nearest half inch**.

1.

Bar length:



2.

Bar length:




3.

Bar length:



4.

Bar length:



5.

Bar length:



6.

Bar length:



7.

Bar length:



8.

Bar length:



9.

Bar length:



10.

Bar length:



## Measuring Length (A) Answers

Name: \_\_\_\_\_

Date: \_\_\_\_\_

Score: \_\_\_\_\_

Measure the length of each bar **to the nearest half inch**.

1.

Bar length:



2.

Bar length:



3.

Bar length:



4.

Bar length:



5.

Bar length:



6.

Bar length:



7.

Bar length:



8.

Bar length:



9.

Bar length:



10.

Bar length:



## Measuring Length (B)

Name: \_\_\_\_\_

Date: \_\_\_\_\_

Score: \_\_\_\_\_

Measure the length of each bar **to the nearest half inch**.

1.

Bar length:



2.

Bar length:



3.

Bar length:



4.

Bar length:



5.

Bar length:



6.

Bar length:



7.

Bar length:



8.

Bar length:



9.

Bar length:



10.

Bar length:



## Measuring Length (B) Answers

Name: \_\_\_\_\_

Date: \_\_\_\_\_

Score: \_\_\_\_\_

Measure the length of each bar **to the nearest half inch**.

1.

Bar length:



2.

Bar length:



3.

Bar length:



4.

Bar length:



5.

Bar length:



6.

Bar length:



7.

Bar length:



8.

Bar length:



9.

Bar length:



10.

Bar length:



# Measuring Length (C)

Name: \_\_\_\_\_

Date: \_\_\_\_\_

Score: \_\_\_\_\_

Measure the length of each bar **to the nearest half inch**.

1.

Bar length:



2.

Bar length:



3.

Bar length:



4.

Bar length:



5.

Bar length:



6.

Bar length:



7.

Bar length:



8.

Bar length:



9.

Bar length:



10.

Bar length:



# Measuring Length (C) Answers

Name: \_\_\_\_\_ Date: \_\_\_\_\_ Score: \_\_\_\_\_

Measure the length of each bar **to the nearest half inch**.

1.

Bar length:



2.

Bar length:



3.

Bar length:



4.

Bar length:



5.

Bar length:



6.

Bar length:



7.

Bar length:



8.

Bar length:



9.

Bar length:



10.

Bar length:



# Measuring Length (D)

Name: \_\_\_\_\_

Date: \_\_\_\_\_

Score: \_\_\_\_\_

Measure the length of each bar **to the nearest half inch**.

1.

Bar length:



2.

Bar length:



3.

Bar length:



4.

Bar length:



5.

Bar length:



6.

Bar length:



7.

Bar length:



8.

Bar length:



9.

Bar length:



10.

Bar length:



## Measuring Length (D) Answers

Name: \_\_\_\_\_ Date: \_\_\_\_\_ Score: \_\_\_\_\_

Measure the length of each bar **to the nearest half inch**.

1.

Bar length:



2.

Bar length:



3.

Bar length:



4.

Bar length:



5.

Bar length:



6.

Bar length:



7.

Bar length:



8.

Bar length:



9.

Bar length:



10.

Bar length:





# Measuring Length (E)

Name: \_\_\_\_\_ Date: \_\_\_\_\_ Score: \_\_\_\_\_

Measure the length of each bar **to the nearest half inch**.

1.

Bar length:



2.

Bar length:



3.

Bar length:



4.

Bar length:



5.

Bar length:



6.

Bar length:



7.

Bar length:



8.

Bar length:



9.

Bar length:



10.

Bar length:



# Measuring Length (E) Answers

Name: \_\_\_\_\_ Date: \_\_\_\_\_ Score: \_\_\_\_\_

Measure the length of each bar **to the nearest half inch**.

1.

Bar length:



2.

Bar length:



3.

Bar length:



4.

Bar length:



5.

Bar length:



6.

Bar length:



7.

Bar length:



8.

Bar length:



9.

Bar length:



10.

Bar length:



# Measuring Length (F)

Name: \_\_\_\_\_

Date: \_\_\_\_\_

Score: \_\_\_\_\_

Measure the length of each bar **to the nearest half inch**.

1.



Bar length:

2.



Bar length:

3.



Bar length:

4.



Bar length:

5.



Bar length:

6.



Bar length:

7.



Bar length:

8.



Bar length:

9.



Bar length:

10.



Bar length:

# Measuring Length (F) Answers

Name: \_\_\_\_\_

Date: \_\_\_\_\_

Score: \_\_\_\_\_

Measure the length of each bar **to the nearest half inch**.

1.




Bar length:

2.



Bar length:

3.



Bar length:

4.



Bar length:

5.



Bar length:

6.



Bar length:

7.



Bar length:

8.



Bar length:

9.



Bar length:

10.



Bar length:

# Measuring Length (G)

Name: \_\_\_\_\_

Date: \_\_\_\_\_

Score: \_\_\_\_\_

Measure the length of each bar **to the nearest half inch**.

1.

Bar length:



2.

Bar length:



3.

Bar length:



4.

Bar length:



5.

Bar length:



6.

Bar length:



7.

Bar length:



8.

Bar length:



9.

Bar length:



10.

Bar length:



# Measuring Length (G) Answers

Name: \_\_\_\_\_ Date: \_\_\_\_\_ Score: \_\_\_\_\_

Measure the length of each bar **to the nearest half inch**.

1.

Bar length:



2.

Bar length:



3.

Bar length:



4.

Bar length:



5.

Bar length:



6.

Bar length:



7.

Bar length:



8.

Bar length:



9.

Bar length:



10.

Bar length:



# Measuring Length (H)

Name: \_\_\_\_\_

Date: \_\_\_\_\_

Score: \_\_\_\_\_

Measure the length of each bar **to the nearest half inch**.

1.

Bar length:



2.

Bar length:



3.

Bar length:



4.

Bar length:



5.

Bar length:



6.

Bar length:



7.

Bar length:



8.

Bar length:



9.

Bar length:



10.

Bar length:



# Measuring Length (H) Answers

Name: \_\_\_\_\_ Date: \_\_\_\_\_ Score: \_\_\_\_\_

Measure the length of each bar **to the nearest half inch**.

1.

Bar length:



2.

Bar length:



3.

Bar length:



4.

Bar length:



5.

Bar length:



6.

Bar length:



7.

Bar length:



8.

Bar length:



9.

Bar length:



10.

Bar length:






# Measuring Length (I)


Name: \_\_\_\_\_ Date: \_\_\_\_\_ Score: \_\_\_\_\_

Measure the length of each bar **to the nearest half inch**.


1. Bar length:




2. Bar length:



3. Bar length:




4. Bar length:




5. Bar length:




6. Bar length:



7. Bar length:



8. Bar length:



9. Bar length:



10. Bar length:




# Measuring Length (I) Answers

Name: \_\_\_\_\_ Date: \_\_\_\_\_ Score: \_\_\_\_\_

Measure the length of each bar **to the nearest half inch**.

1.

Bar length:



2.

Bar length:




3.

Bar length:




4.

Bar length:



5.

Bar length:




6.

Bar length:




7.

Bar length:



8.

Bar length:



9.

Bar length:



10.

Bar length:



# Measuring Length (J)

Name: \_\_\_\_\_

Date: \_\_\_\_\_

Score: \_\_\_\_\_

Measure the length of each bar **to the nearest half inch**.

1.

Bar length:




2.

Bar length:



3.

Bar length:



4.

Bar length:



5.

Bar length:



6.

Bar length:



7.

Bar length:



8.

Bar length:



9.

Bar length:



10.

Bar length:



# Measuring Length (J) Answers

Name: \_\_\_\_\_ Date: \_\_\_\_\_ Score: \_\_\_\_\_

Measure the length of each bar **to the nearest half inch**.

1.

Bar length:



2.

Bar length:



3.

Bar length:



4.

Bar length:



5.

Bar length:



6.

Bar length:



7.

Bar length:



8.

Bar length:



9.

Bar length:



10.

Bar length:

