

Measuring Length (I)

Name: _____

Date: _____

Score: _____

Measure the length of each bar **to the nearest quarter inch**.


1.

Bar length:




2.

Bar length:



3.

Bar length:



4.

Bar length:



5.

Bar length:



6.

Bar length:



7.

Bar length:




8.

Bar length:



9.

Bar length:



10.

Bar length:

