

Measuring Length (A)

Name: _____

Date: _____

Score: _____

Measure the length of each bar **to the nearest quarter inch**.

1.



Bar length:

2.



Bar length:

3.



Bar length:

4.



Bar length:

5.



Bar length:

6.



Bar length:

7.



Bar length:

8.



Bar length:

9.



Bar length:

10.



Bar length:

Measuring Length (A) Answers

Name: _____

Date: _____

Score: _____

Measure the length of each bar **to the nearest quarter inch**.

1.



Bar length:

2.



Bar length:

3.



Bar length:

4.



Bar length:

5.



Bar length:

6.



Bar length:

7.



Bar length:

8.



Bar length:

9.



Bar length:

10.



Bar length:

Measuring Length (B)

Name: _____

Date: _____

Score: _____

Measure the length of each bar **to the nearest quarter inch**.

1.

Bar length:



2.

Bar length:



3.

Bar length:



4.

Bar length:



5.

Bar length:



6.

Bar length:



7.

Bar length:



8.

Bar length:



9.

Bar length:



10.

Bar length:



Measuring Length (B) Answers

Name: _____ Date: _____ Score: _____

Measure the length of each bar **to the nearest quarter inch**.

1.

Bar length:



2.

Bar length:



3.

Bar length:



4.

Bar length:



5.

Bar length:



6.

Bar length:



7.

Bar length:



8.

Bar length:



9.

Bar length:



10.

Bar length:



Measuring Length (C)

Name: _____

Date: _____

Score: _____

Measure the length of each bar **to the nearest quarter inch**.

1.

Bar length:



2.

Bar length:



3.

Bar length:



4.

Bar length:



5.

Bar length:



6.

Bar length:



7.

Bar length:



8.

Bar length:



9.

Bar length:



10.

Bar length:



Measuring Length (C) Answers

Name: _____ Date: _____ Score: _____

Measure the length of each bar **to the nearest quarter inch**.

1.

Bar length:



2.

Bar length:



3.

Bar length:



4.

Bar length:



5.

Bar length:



6.

Bar length:



7.

Bar length:



8.

Bar length:



9.

Bar length:



10.

Bar length:



Measuring Length (D)

Name: _____

Date: _____

Score: _____

Measure the length of each bar **to the nearest quarter inch**.

1.

Bar length:



2.

Bar length:



3.

Bar length:



4.

Bar length:



5.

Bar length:



6.

Bar length:



7.

Bar length:



8.

Bar length:



9.

Bar length:



10.

Bar length:



Measuring Length (D) Answers

Name: _____ Date: _____ Score: _____

Measure the length of each bar **to the nearest quarter inch**.

1.

Bar length:



2.

Bar length:



3.

Bar length:



4.

Bar length:



5.

Bar length:



6.

Bar length:



7.

Bar length:



8.

Bar length:



9.

Bar length:



10.

Bar length:



Measuring Length (E)

Name: _____

Date: _____

Score: _____

Measure the length of each bar **to the nearest quarter inch**.

1.

Bar length:



2.

Bar length:



3.

Bar length:



4.

Bar length:



5.

Bar length:



6.

Bar length:



7.

Bar length:



8.

Bar length:



9.

Bar length:



10.

Bar length:



Measuring Length (E) Answers

Name: _____ Date: _____ Score: _____

Measure the length of each bar **to the nearest quarter inch**.

1.

Bar length:



2.

Bar length:



3.

Bar length:



4.

Bar length:



5.

Bar length:



6.

Bar length:



7.

Bar length:



8.

Bar length:



9.

Bar length:



10.

Bar length:



Measuring Length (F)

Name: _____ Date: _____ Score: _____

Measure the length of each bar **to the nearest quarter inch**.

1.

Bar length:



2.

Bar length:



3.

Bar length:



4.

Bar length:



5.

Bar length:



6.

Bar length:



7.

Bar length:



8.

Bar length:



9.

Bar length:



10.

Bar length:



Measuring Length (F) Answers

Name: _____ Date: _____ Score: _____

Measure the length of each bar **to the nearest quarter inch**.

1.

Bar length:



2.

Bar length:



3.

Bar length:



4.

Bar length:



5.

Bar length:



6.

Bar length:



7.

Bar length:



8.

Bar length:



9.

Bar length:



10.

Bar length:



Measuring Length (G)

Name: _____

Date: _____

Score: _____

Measure the length of each bar **to the nearest quarter inch**.

1.

Bar length:



2.

Bar length:



3.

Bar length:



4.

Bar length:



5.

Bar length:



6.

Bar length:



7.

Bar length:



8.

Bar length:



9.

Bar length:



10.

Bar length:



Measuring Length (G) Answers

Name: _____

Date: _____

Score: _____

Measure the length of each bar **to the nearest quarter inch**.

1.

Bar length:



2.

Bar length:



3.

Bar length:



4.

Bar length:



5.

Bar length:



6.

Bar length:



7.

Bar length:



8.

Bar length:



9.

Bar length:



10.

Bar length:



Measuring Length (H)

Name: _____

Date: _____

Score: _____

Measure the length of each bar **to the nearest quarter inch**.

1.

Bar length:



2.

Bar length:



3.

Bar length:



4.

Bar length:



5.

Bar length:



6.

Bar length:



7.

Bar length:



8.

Bar length:



9.

Bar length:



10.

Bar length:



Measuring Length (H) Answers

Name: _____

Date: _____

Score: _____

Measure the length of each bar **to the nearest quarter inch**.

1.

Bar length:



2.

Bar length:



3.

Bar length:



4.

Bar length:



5.

Bar length:



6.

Bar length:



7.

Bar length:



8.

Bar length:



9.

Bar length:



10.

Bar length:



Measuring Length (I)

Name: _____ Date: _____ Score: _____

Measure the length of each bar **to the nearest quarter inch**.


1.

Bar length:




2.

Bar length:



3.

Bar length:



4.

Bar length:



5.

Bar length:



6.

Bar length:



7.

Bar length:



8.

Bar length:




9.

Bar length:



10.

Bar length:




Measuring Length (I) Answers

Name: _____ Date: _____ Score: _____

Measure the length of each bar **to the nearest quarter inch**.


1.

Bar length:




2.

Bar length:



3.

Bar length:



4.

Bar length:




5.

Bar length:



6.

Bar length:



7.

Bar length:



8.

Bar length:




9.

Bar length:



10.

Bar length:



Measuring Length (J)

Name: _____

Date: _____

Score: _____

Measure the length of each bar **to the nearest quarter inch**.

1.

Bar length:



2.

Bar length:



3.

Bar length:



4.

Bar length:



5.

Bar length:



6.

Bar length:



7.

Bar length:



8.

Bar length:



9.

Bar length:



10.

Bar length:



Measuring Length (J) Answers

Name: _____ Date: _____ Score: _____

Measure the length of each bar **to the nearest quarter inch**.

1.

Bar length:



2.

Bar length:



3.

Bar length:



4.

Bar length:



5.

Bar length:



6.

Bar length:



7.

Bar length:



8.

Bar length:



9.

Bar length:



10.

Bar length:

