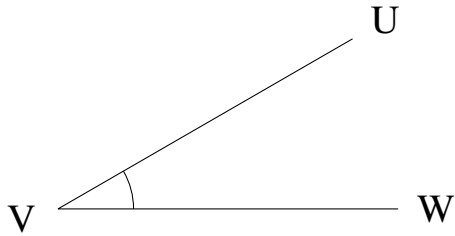


Measuring Angles (F)

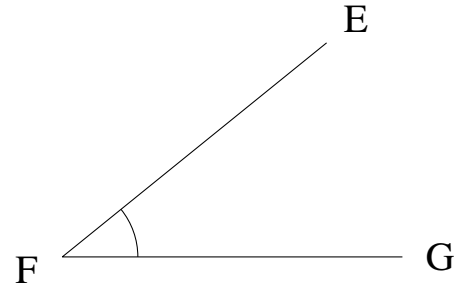
Estimate and measure each angle.

1.



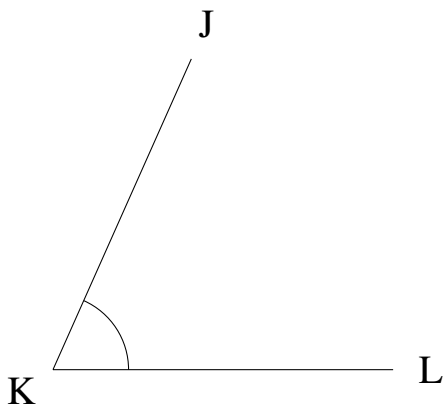
$$m\angle UVW =$$

2.



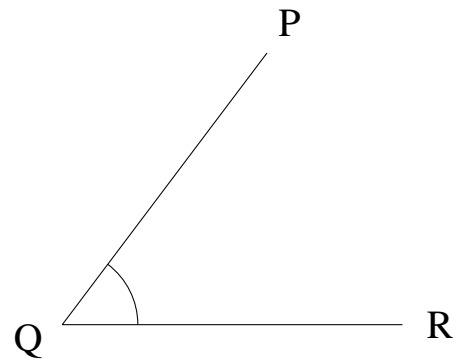
$$m\angle EFG =$$

3.



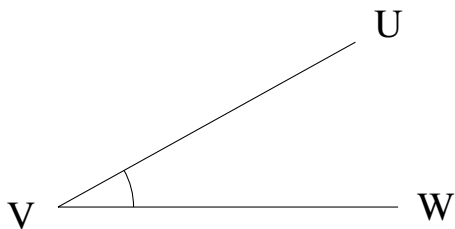
$$m\angle JKL =$$

4.



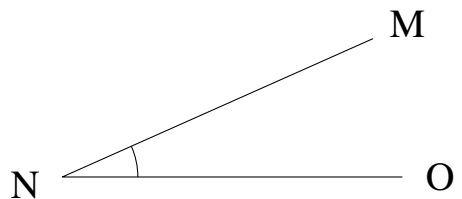
$$m\angle PQR =$$

5.



$$m\angle UVW =$$

6.

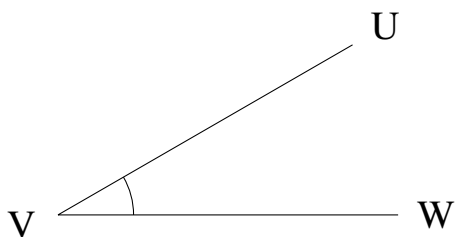


$$m\angle MNO =$$

Measuring Angles (F) Answers

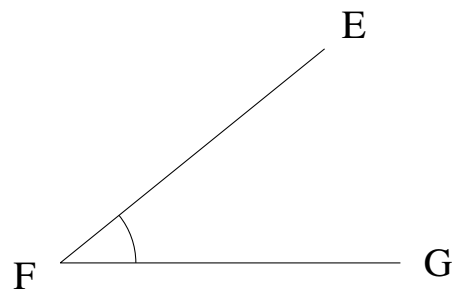
Estimate and measure each angle.

1.



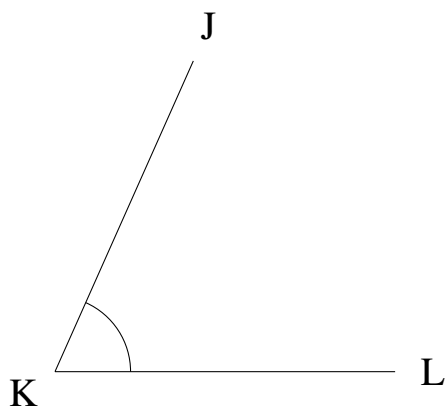
$$m\angle UVW = 30^\circ$$

2.



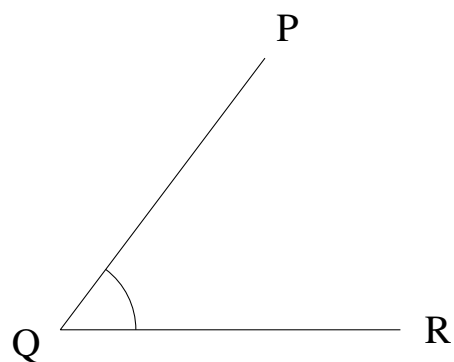
$$m\angle EFG = 39^\circ$$

3.



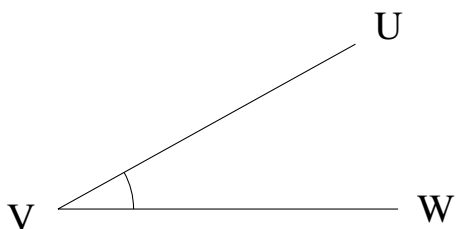
$$m\angle JKL = 66^\circ$$

4.



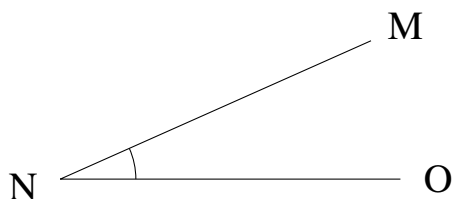
$$m\angle PQR = 53^\circ$$

5.



$$m\angle UVW = 29^\circ$$

6.



$$m\angle MNO = 24^\circ$$