

Converting Between mm and cm (A)

Name: _____

Date: _____

Score: _____ /10

Complete each conversion. Symbols for copying and pasting: $\times \div ^2 ^3$.



1. Convert 73.36 cm to mm
2. Convert 180 mm to cm
3. Convert 448 mm to cm
4. Convert 448.9 mm to cm
5. Convert 3.2 cm to mm
6. Convert 31,000 mm to cm
7. Convert 0.24 cm to mm
8. Convert 66,910 cm to mm
9. Convert 16.44 cm to mm
10. Convert 231.1 mm to cm

Converting Between mm and cm (A) Answers

Name: _____

Date: _____

Score: _____ /10

Complete each conversion. Symbols for copying and pasting: $\times \div ^2 ^3$.



1. Convert 73.36 cm to mm

$$73.36 \text{ cm} \times 10 = 733.6 \text{ mm}$$

2. Convert 180 mm to cm

$$180 \text{ mm} \div 10 = 18 \text{ cm}$$

3. Convert 448 mm to cm

$$448 \text{ mm} \div 10 = 44.8 \text{ cm}$$

4. Convert 448.9 mm to cm

$$448.9 \text{ mm} \div 10 = 44.89 \text{ cm}$$

5. Convert 3.2 cm to mm

$$3.2 \text{ cm} \times 10 = 32 \text{ mm}$$

6. Convert 31,000 mm to cm

$$31,000 \text{ mm} \div 10 = 3100 \text{ cm}$$

7. Convert 0.24 cm to mm

$$0.24 \text{ cm} \times 10 = 2.4 \text{ mm}$$

8. Convert 66,910 cm to mm

$$66,910 \text{ cm} \times 10 = 669,100 \text{ mm}$$

9. Convert 16.44 cm to mm

$$16.44 \text{ cm} \times 10 = 164.4 \text{ mm}$$

10. Convert 231.1 mm to cm

$$231.1 \text{ mm} \div 10 = 23.11 \text{ cm}$$

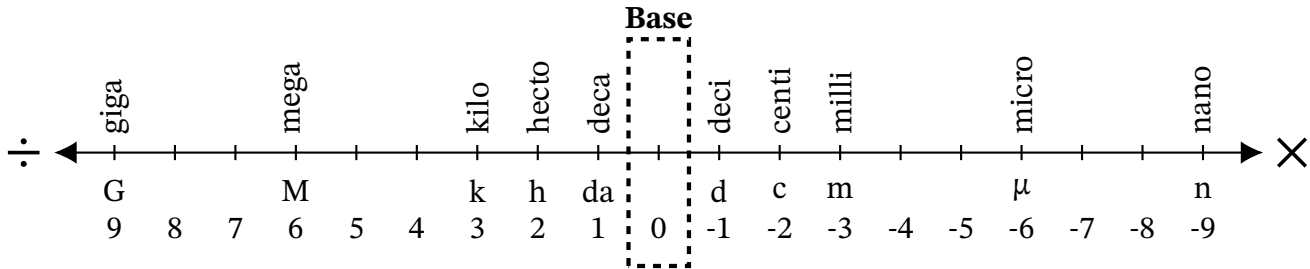
Converting Between mm and cm (B)

Name: _____

Date: _____

Score: _____ /10

Complete each conversion. Symbols for copying and pasting: $\times \div ^2 ^3$.



1. Convert 64,900 mm to cm
2. Convert 155,300 mm to cm
3. Convert 6591 cm to mm
4. Convert 1.499 cm to mm
5. Convert 28.37 cm to mm
6. Convert 43.04 cm to mm
7. Convert 145 cm to mm
8. Convert 75.4 mm to cm
9. Convert 91 mm to cm
10. Convert 22,000 mm to cm

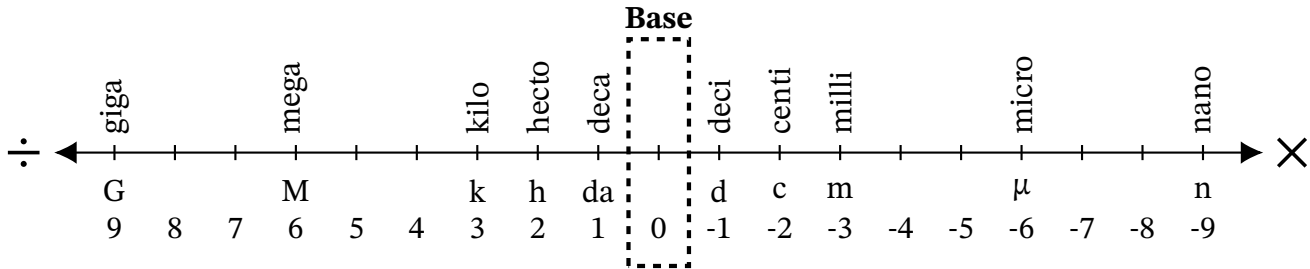
Converting Between mm and cm (B) Answers

Name: _____

Date: _____

Score: _____ /10

Complete each conversion. Symbols for copying and pasting: $\times \div ^2 ^3$.



1. Convert 64,900 mm to cm

$$64,900 \text{ mm} \div 10 = 6490 \text{ cm}$$

2. Convert 155,300 mm to cm

$$155,300 \text{ mm} \div 10 = 15,530 \text{ cm}$$

3. Convert 6591 cm to mm

$$6591 \text{ cm} \times 10 = 65,910 \text{ mm}$$

4. Convert 1.499 cm to mm

$$1.499 \text{ cm} \times 10 = 14.99 \text{ mm}$$

5. Convert 28.37 cm to mm

$$28.37 \text{ cm} \times 10 = 283.7 \text{ mm}$$

6. Convert 43.04 cm to mm

$$43.04 \text{ cm} \times 10 = 430.4 \text{ mm}$$

7. Convert 145 cm to mm

$$145 \text{ cm} \times 10 = 1450 \text{ mm}$$

8. Convert 75.4 mm to cm

$$75.4 \text{ mm} \div 10 = 7.54 \text{ cm}$$

9. Convert 91 mm to cm

$$91 \text{ mm} \div 10 = 9.1 \text{ cm}$$

10. Convert 22,000 mm to cm

$$22,000 \text{ mm} \div 10 = 2200 \text{ cm}$$

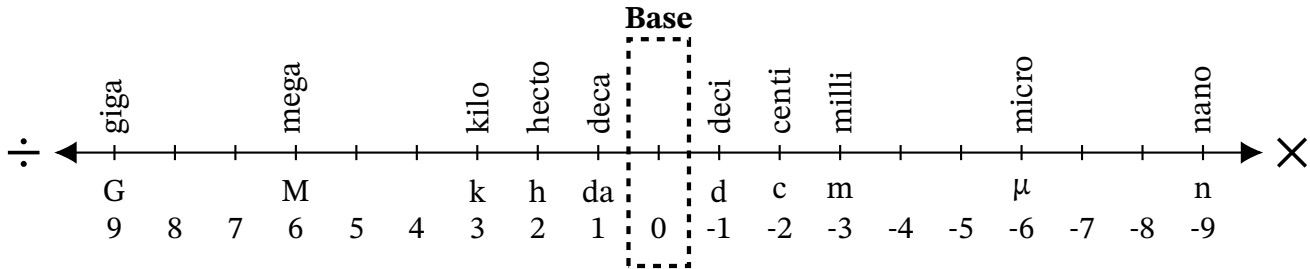
Converting Between mm and cm (C)

Name: _____

Date: _____

Score: _____ /10

Complete each conversion. Symbols for copying and pasting: $\times \div ^2 ^3$.



1. Convert 36 mm to cm
2. Convert 8090 cm to mm
3. Convert 109.8 mm to cm
4. Convert 3,834,000 mm to cm
5. Convert 0.34 cm to mm
6. Convert 2100 mm to cm
7. Convert 189,000 mm to cm
8. Convert 7.56 cm to mm
9. Convert 5.4 cm to mm
10. Convert 69 cm to mm

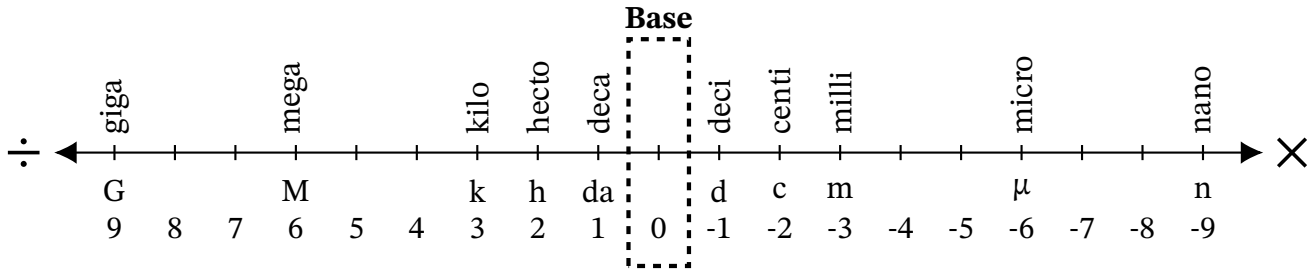
Converting Between mm and cm (C) Answers

Name: _____

Date: _____

Score: _____ /10

Complete each conversion. Symbols for copying and pasting: $\times \div ^2 ^3$.



1. Convert 36 mm to cm

$$36 \text{ mm} \div 10 = 3.6 \text{ cm}$$

2. Convert 8090 cm to mm

$$8090 \text{ cm} \times 10 = 80,900 \text{ mm}$$

3. Convert 109.8 mm to cm

$$109.8 \text{ mm} \div 10 = 10.98 \text{ cm}$$

4. Convert 3,834,000 mm to cm

$$3,834,000 \text{ mm} \div 10 = 383,400 \text{ cm}$$

5. Convert 0.34 cm to mm

$$0.34 \text{ cm} \times 10 = 3.4 \text{ mm}$$

6. Convert 2100 mm to cm

$$2100 \text{ mm} \div 10 = 210 \text{ cm}$$

7. Convert 189,000 mm to cm

$$189,000 \text{ mm} \div 10 = 18,900 \text{ cm}$$

8. Convert 7.56 cm to mm

$$7.56 \text{ cm} \times 10 = 75.6 \text{ mm}$$

9. Convert 5.4 cm to mm

$$5.4 \text{ cm} \times 10 = 54 \text{ mm}$$

10. Convert 69 cm to mm

$$69 \text{ cm} \times 10 = 690 \text{ mm}$$

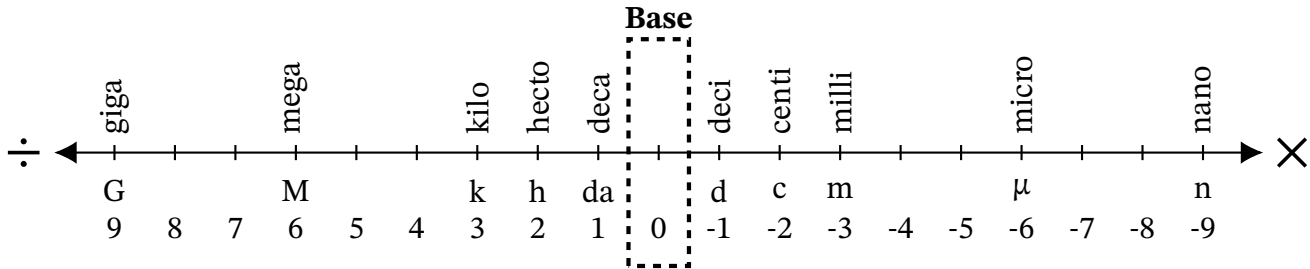
Converting Between mm and cm (D)

Name: _____

Date: _____

Score: _____ /10

Complete each conversion. Symbols for copying and pasting: $\times \div ^2 ^3$.



1. Convert 34,230 cm to mm
2. Convert 99.5 cm to mm
3. Convert 1.3 mm to cm
4. Convert 260 mm to cm
5. Convert 32.4 cm to mm
6. Convert 99.4 cm to mm
7. Convert 27 mm to cm
8. Convert 717,000 mm to cm
9. Convert 7484 mm to cm
10. Convert 954.8 cm to mm

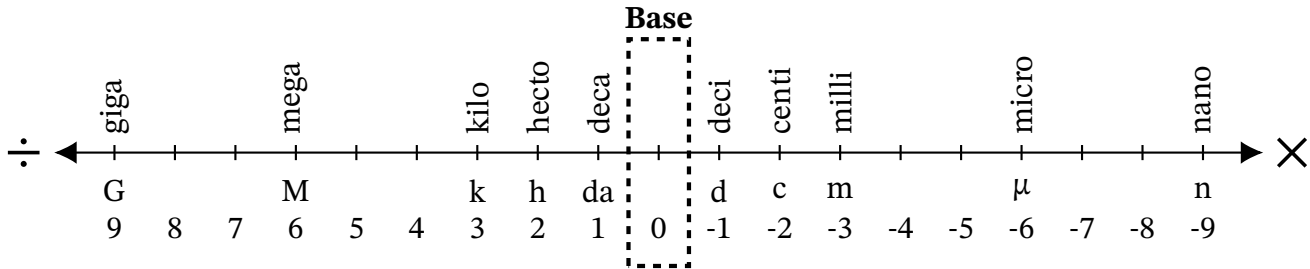
Converting Between mm and cm (D) Answers

Name: _____

Date: _____

Score: _____ /10

Complete each conversion. Symbols for copying and pasting: $\times \div ^2 ^3$.



1. Convert 34,230 cm to mm

$$34,230 \text{ cm} \times 10 = 342,300 \text{ mm}$$

2. Convert 99.5 cm to mm

$$99.5 \text{ cm} \times 10 = 995 \text{ mm}$$

3. Convert 1.3 mm to cm

$$1.3 \text{ mm} \div 10 = 0.13 \text{ cm}$$

4. Convert 260 mm to cm

$$260 \text{ mm} \div 10 = 26 \text{ cm}$$

5. Convert 32.4 cm to mm

$$32.4 \text{ cm} \times 10 = 324 \text{ mm}$$

6. Convert 99.4 cm to mm

$$99.4 \text{ cm} \times 10 = 994 \text{ mm}$$

7. Convert 27 mm to cm

$$27 \text{ mm} \div 10 = 2.7 \text{ cm}$$

8. Convert 717,000 mm to cm

$$717,000 \text{ mm} \div 10 = 71,700 \text{ cm}$$

9. Convert 7484 mm to cm

$$7484 \text{ mm} \div 10 = 748.4 \text{ cm}$$

10. Convert 954.8 cm to mm

$$954.8 \text{ cm} \times 10 = 9548 \text{ mm}$$

Converting Between mm and cm (E)

Name: _____

Date: _____

Score: _____ /10

Complete each conversion. Symbols for copying and pasting: $\times \div ^2 ^3$.



1. Convert 92.85 cm to mm
2. Convert 86 cm to mm
3. Convert 79,740 mm to cm
4. Convert 63,700 mm to cm
5. Convert 93 mm to cm
6. Convert 3.245 cm to mm
7. Convert 71 cm to mm
8. Convert 84 cm to mm
9. Convert 28.4 mm to cm
10. Convert 1,624,000 mm to cm

Converting Between mm and cm (E) Answers

Name: _____

Date: _____

Score: _____ /10

Complete each conversion. Symbols for copying and pasting: $\times \div ^2 ^3$.



1. Convert 92.85 cm to mm

$$92.85 \text{ cm} \times 10 = 928.5 \text{ mm}$$

2. Convert 86 cm to mm

$$86 \text{ cm} \times 10 = 860 \text{ mm}$$

3. Convert 79,740 mm to cm

$$79,740 \text{ mm} \div 10 = 7974 \text{ cm}$$

4. Convert 63,700 mm to cm

$$63,700 \text{ mm} \div 10 = 6370 \text{ cm}$$

5. Convert 93 mm to cm

$$93 \text{ mm} \div 10 = 9.3 \text{ cm}$$

6. Convert 3.245 cm to mm

$$3.245 \text{ cm} \times 10 = 32.45 \text{ mm}$$

7. Convert 71 cm to mm

$$71 \text{ cm} \times 10 = 710 \text{ mm}$$

8. Convert 84 cm to mm

$$84 \text{ cm} \times 10 = 840 \text{ mm}$$

9. Convert 28.4 mm to cm

$$28.4 \text{ mm} \div 10 = 2.84 \text{ cm}$$

10. Convert 1,624,000 mm to cm

$$1,624,000 \text{ mm} \div 10 = 162,400 \text{ cm}$$

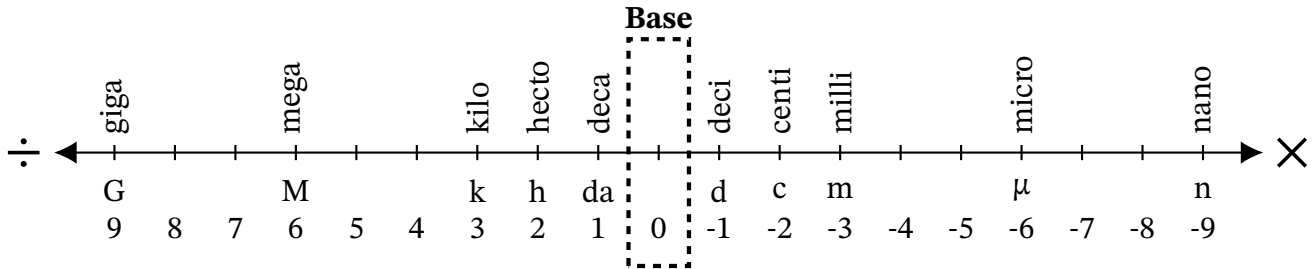
Converting Between mm and cm (F)

Name: _____

Date: _____

Score: _____ /10

Complete each conversion. Symbols for copying and pasting: $\times \div ^2 ^3$.



1. Convert 450 mm to cm
2. Convert 901,200 mm to cm
3. Convert 548.1 cm to mm
4. Convert 84.2 cm to mm
5. Convert 6700 mm to cm
6. Convert 219 cm to mm
7. Convert 12.6 cm to mm
8. Convert 448,000 mm to cm
9. Convert 941 mm to cm
10. Convert 1960 cm to mm

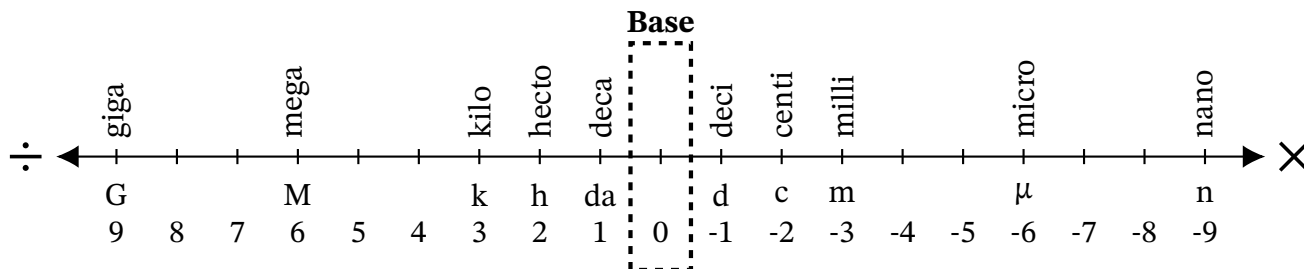
Converting Between mm and cm (F) Answers

Name: _____

Date: _____

Score: _____ /10

Complete each conversion. Symbols for copying and pasting: $\times \div ^2 ^3$.



1. Convert 450 mm to cm

$$450 \text{ mm} \div 10 = 45 \text{ cm}$$

2. Convert 901,200 mm to cm

$$901,200 \text{ mm} \div 10 = 90,120 \text{ cm}$$

3. Convert 548.1 cm to mm

$$548.1 \text{ cm} \times 10 = 5481 \text{ mm}$$

4. Convert 84.2 cm to mm

$$84.2 \text{ cm} \times 10 = 842 \text{ mm}$$

5. Convert 6700 mm to cm

$$6700 \text{ mm} \div 10 = 670 \text{ cm}$$

6. Convert 219 cm to mm

$$219 \text{ cm} \times 10 = 2190 \text{ mm}$$

7. Convert 12.6 cm to mm

$$12.6 \text{ cm} \times 10 = 126 \text{ mm}$$

8. Convert 448,000 mm to cm

$$448,000 \text{ mm} \div 10 = 44,800 \text{ cm}$$

9. Convert 941 mm to cm

$$941 \text{ mm} \div 10 = 94.1 \text{ cm}$$

10. Convert 1960 cm to mm

$$1960 \text{ cm} \times 10 = 19,600 \text{ mm}$$

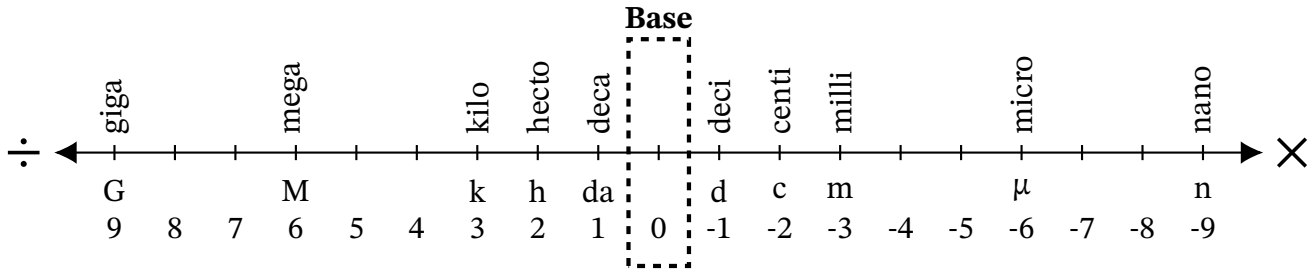
Converting Between mm and cm (G)

Name: _____

Date: _____

Score: _____ /10

Complete each conversion. Symbols for copying and pasting: $\times \div ^2 ^3$.



1. Convert 6394 mm to cm
2. Convert 95.84 cm to mm
3. Convert 5920 cm to mm
4. Convert 858.9 cm to mm
5. Convert 91.7 cm to mm
6. Convert 5.747 cm to mm
7. Convert 379,700 mm to cm
8. Convert 290 mm to cm
9. Convert 92.7 mm to cm
10. Convert 2940 mm to cm

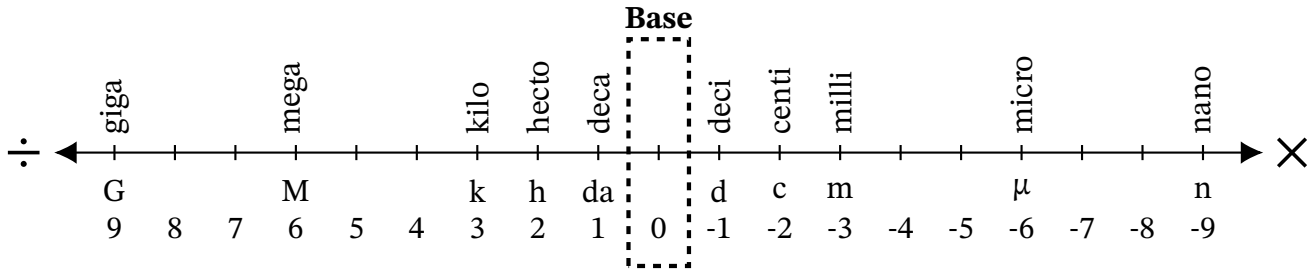
Converting Between mm and cm (G) Answers

Name: _____

Date: _____

Score: _____ /10

Complete each conversion. Symbols for copying and pasting: $\times \div ^2 ^3$.



1. Convert 6394 mm to cm

$$6394 \text{ mm} \div 10 = 639.4 \text{ cm}$$

2. Convert 95.84 cm to mm

$$95.84 \text{ cm} \times 10 = 958.4 \text{ mm}$$

3. Convert 5920 cm to mm

$$5920 \text{ cm} \times 10 = 59,200 \text{ mm}$$

4. Convert 858.9 cm to mm

$$858.9 \text{ cm} \times 10 = 8589 \text{ mm}$$

5. Convert 91.7 cm to mm

$$91.7 \text{ cm} \times 10 = 917 \text{ mm}$$

6. Convert 5.747 cm to mm

$$5.747 \text{ cm} \times 10 = 57.47 \text{ mm}$$

7. Convert 379,700 mm to cm

$$379,700 \text{ mm} \div 10 = 37,970 \text{ cm}$$

8. Convert 290 mm to cm

$$290 \text{ mm} \div 10 = 29 \text{ cm}$$

9. Convert 92.7 mm to cm

$$92.7 \text{ mm} \div 10 = 9.27 \text{ cm}$$

10. Convert 2940 mm to cm

$$2940 \text{ mm} \div 10 = 294 \text{ cm}$$

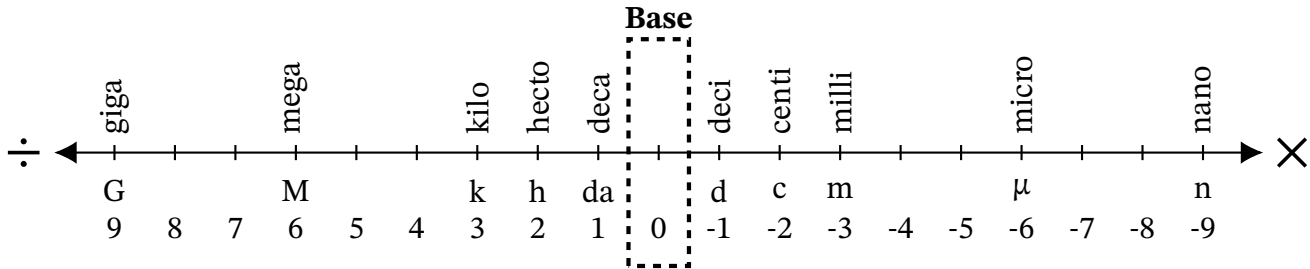
Converting Between mm and cm (H)

Name: _____

Date: _____

Score: _____ /10

Complete each conversion. Symbols for copying and pasting: $\times \div ^2 ^3$.



1. Convert 329.6 mm to cm
2. Convert 755.3 mm to cm
3. Convert 9295 mm to cm
4. Convert 144 cm to mm
5. Convert 160 cm to mm
6. Convert 3050 cm to mm
7. Convert 8256 cm to mm
8. Convert 577.4 mm to cm
9. Convert 22.27 cm to mm
10. Convert 8.7 mm to cm

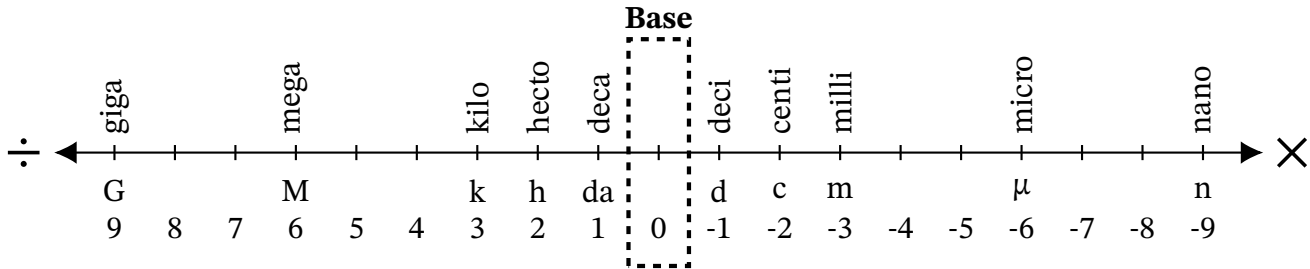
Converting Between mm and cm (H) Answers

Name: _____

Date: _____

Score: _____ /10

Complete each conversion. Symbols for copying and pasting: $\times \div ^2 ^3$.



1. Convert 329.6 mm to cm

$329.6 \text{ mm} \div 10 = 32.96 \text{ cm}$

2. Convert 755.3 mm to cm

$755.3 \text{ mm} \div 10 = 75.53 \text{ cm}$

3. Convert 9295 mm to cm

$9295 \text{ mm} \div 10 = 929.5 \text{ cm}$

4. Convert 144 cm to mm

$144 \text{ cm} \times 10 = 1440 \text{ mm}$

5. Convert 160 cm to mm

$160 \text{ cm} \times 10 = 1600 \text{ mm}$

6. Convert 3050 cm to mm

$3050 \text{ cm} \times 10 = 30,500 \text{ mm}$

7. Convert 8256 cm to mm

$8256 \text{ cm} \times 10 = 82,560 \text{ mm}$

8. Convert 577.4 mm to cm

$577.4 \text{ mm} \div 10 = 57.74 \text{ cm}$

9. Convert 22.27 cm to mm

$22.27 \text{ cm} \times 10 = 222.7 \text{ mm}$

10. Convert 8.7 mm to cm

$8.7 \text{ mm} \div 10 = 0.87 \text{ cm}$

Converting Between mm and cm (I)

Name: _____

Date: _____

Score: _____ /10

Complete each conversion. Symbols for copying and pasting: $\times \div ^2 ^3$.



1. Convert 306.2 cm to mm
2. Convert 190 mm to cm
3. Convert 6591 mm to cm
4. Convert 0.94 cm to mm
5. Convert 231.2 mm to cm
6. Convert 840 cm to mm
7. Convert 3.8 mm to cm
8. Convert 2120 cm to mm
9. Convert 8880 mm to cm
10. Convert 71 cm to mm

Converting Between mm and cm (I) Answers

Name: _____

Date: _____

Score: _____ /10

Complete each conversion. Symbols for copying and pasting: $\times \div ^2 ^3$.



1. Convert 306.2 cm to mm

$306.2 \text{ cm} \times 10 = 3062 \text{ mm}$

2. Convert 190 mm to cm

$190 \text{ mm} \div 10 = 19 \text{ cm}$

3. Convert 6591 mm to cm

$6591 \text{ mm} \div 10 = 659.1 \text{ cm}$

4. Convert 0.94 cm to mm

$0.94 \text{ cm} \times 10 = 9.4 \text{ mm}$

5. Convert 231.2 mm to cm

$231.2 \text{ mm} \div 10 = 23.12 \text{ cm}$

6. Convert 840 cm to mm

$840 \text{ cm} \times 10 = 8400 \text{ mm}$

7. Convert 3.8 mm to cm

$3.8 \text{ mm} \div 10 = 0.38 \text{ cm}$

8. Convert 2120 cm to mm

$2120 \text{ cm} \times 10 = 21,200 \text{ mm}$

9. Convert 8880 mm to cm

$8880 \text{ mm} \div 10 = 888 \text{ cm}$

10. Convert 71 cm to mm

$71 \text{ cm} \times 10 = 710 \text{ mm}$

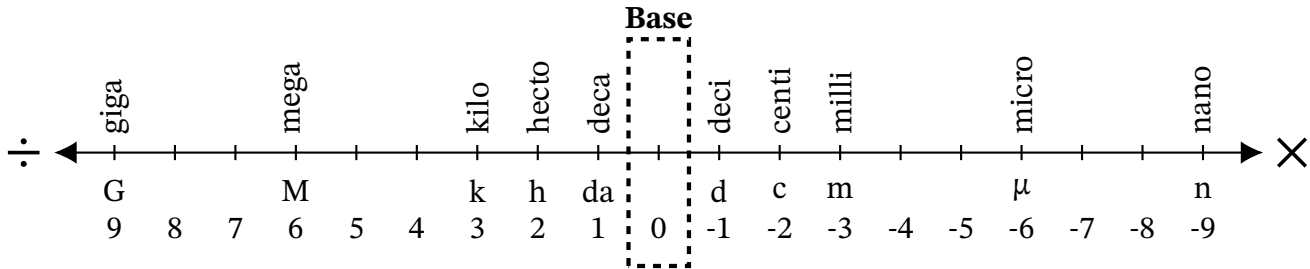
Converting Between mm and cm (J)

Name: _____

Date: _____

Score: _____ /10

Complete each conversion. Symbols for copying and pasting: $\times \div ^2 ^3$.



1. Convert 69,540 cm to mm
2. Convert 1,368,000 mm to cm
3. Convert 8540 mm to cm
4. Convert 6653 mm to cm
5. Convert 59 cm to mm
6. Convert 534 cm to mm
7. Convert 2.97 cm to mm
8. Convert 3200 mm to cm
9. Convert 5.1 cm to mm
10. Convert 3380 mm to cm

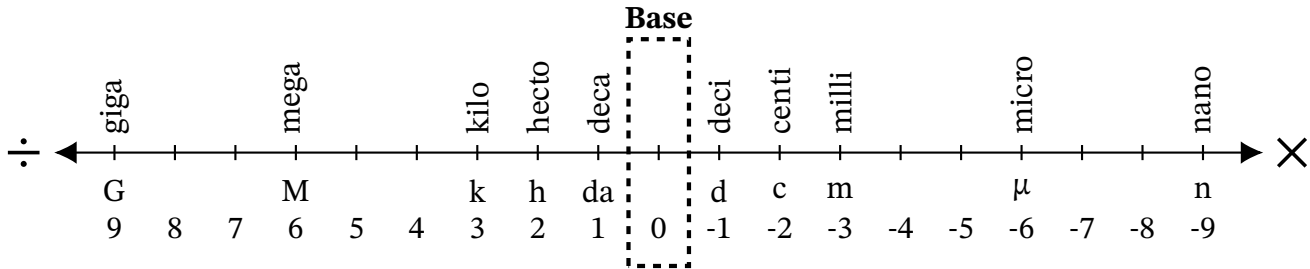
Converting Between mm and cm (J) Answers

Name: _____

Date: _____

Score: _____ /10

Complete each conversion. Symbols for copying and pasting: $\times \div ^2 ^3$.



1. Convert 69,540 cm to mm

$$69,540 \text{ cm} \times 10 = 695,400 \text{ mm}$$

2. Convert 1,368,000 mm to cm

$$1,368,000 \text{ mm} \div 10 = 136,800 \text{ cm}$$

3. Convert 8540 mm to cm

$$8540 \text{ mm} \div 10 = 854 \text{ cm}$$

4. Convert 6653 mm to cm

$$6653 \text{ mm} \div 10 = 665.3 \text{ cm}$$

5. Convert 59 cm to mm

$$59 \text{ cm} \times 10 = 590 \text{ mm}$$

6. Convert 534 cm to mm

$$534 \text{ cm} \times 10 = 5340 \text{ mm}$$

7. Convert 2.97 cm to mm

$$2.97 \text{ cm} \times 10 = 29.7 \text{ mm}$$

8. Convert 3200 mm to cm

$$3200 \text{ mm} \div 10 = 320 \text{ cm}$$

9. Convert 5.1 cm to mm

$$5.1 \text{ cm} \times 10 = 51 \text{ mm}$$

10. Convert 3380 mm to cm

$$3380 \text{ mm} \div 10 = 338 \text{ cm}$$