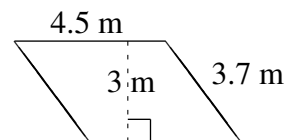
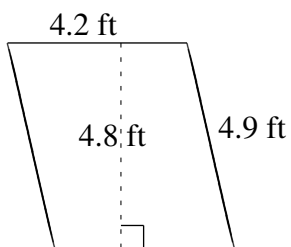
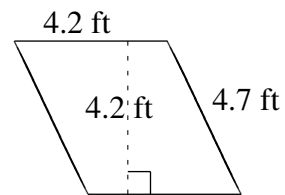
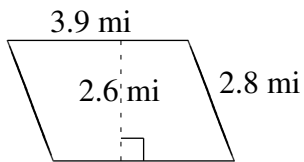
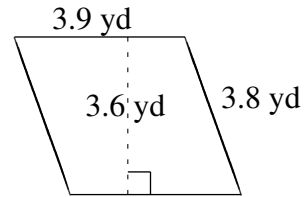
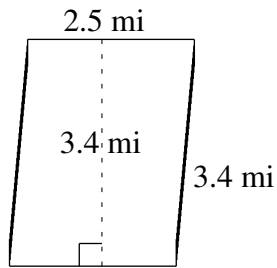


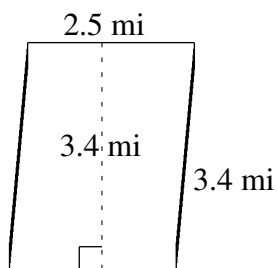
Area and Perimeter of Parallelograms (B)

Find the area and perimeter of each parallelogram.

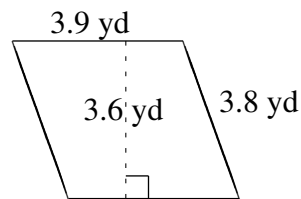


Area and Perimeter of Parallelograms (B) Answers

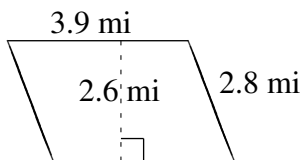
Find the area and perimeter of each parallelogram.



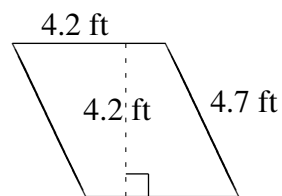
$$A = 8.50 \text{ mi}^2$$
$$P = 11.8 \text{ mi}$$



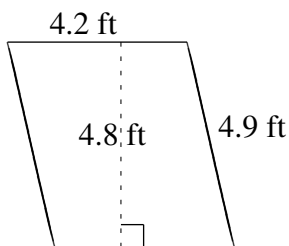
$$A = 14.04 \text{ yd}^2$$
$$P = 15.4 \text{ yd}$$



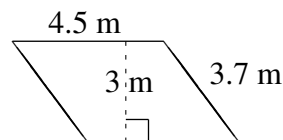
$$A = 10.14 \text{ mi}^2$$
$$P = 13.4 \text{ mi}$$



$$A = 17.64 \text{ ft}^2$$
$$P = 17.8 \text{ ft}$$



$$A = 20.16 \text{ ft}^2$$
$$P = 18.2 \text{ ft}$$



$$A = 13.5 \text{ m}^2$$
$$P = 16.4 \text{ m}$$