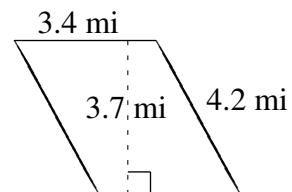
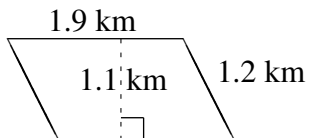
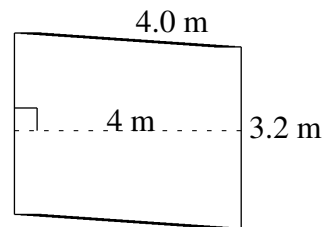
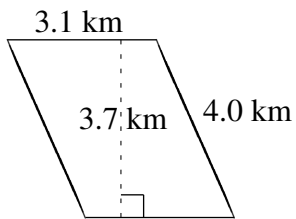
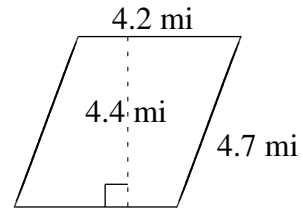
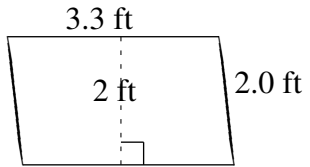


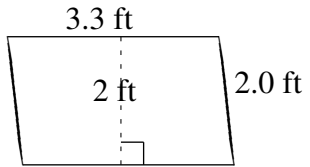
## Area and Perimeter of Parallelograms (J)

Find the area and perimeter of each parallelogram.

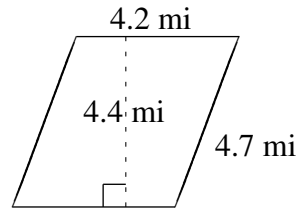


## Area and Perimeter of Parallelograms (J) Answers

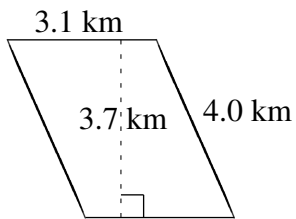
Find the area and perimeter of each parallelogram.



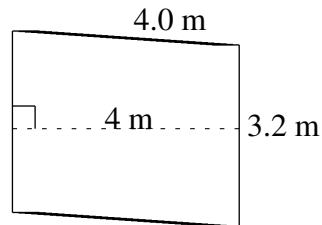
$$A = 6.6 \text{ ft}^2$$
$$P = 10.6 \text{ ft}$$



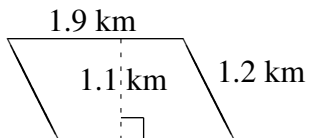
$$A = 18.48 \text{ mi}^2$$
$$P = 17.8 \text{ mi}$$



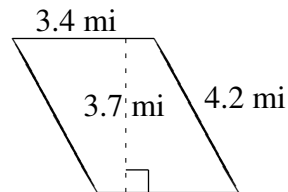
$$A = 11.47 \text{ km}^2$$
$$P = 14.2 \text{ km}$$



$$A = 12.8 \text{ m}^2$$
$$P = 14.4 \text{ m}$$



$$A = 2.09 \text{ km}^2$$
$$P = 6.2 \text{ km}$$



$$A = 12.58 \text{ mi}^2$$
$$P = 15.2 \text{ mi}$$