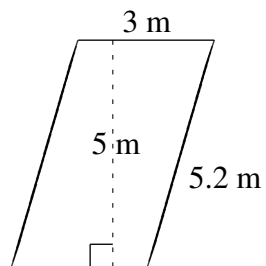
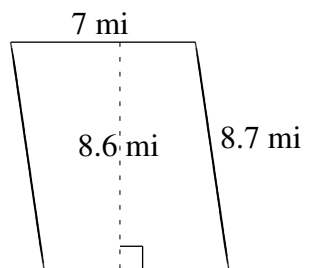
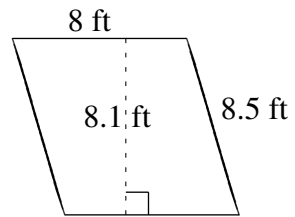
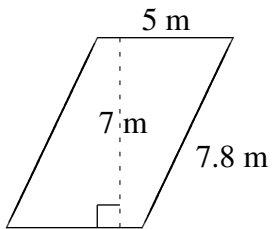
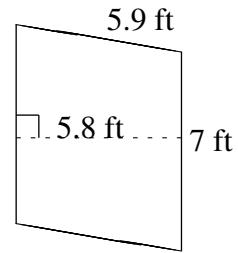
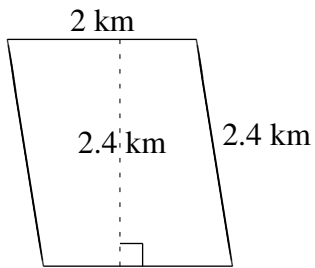


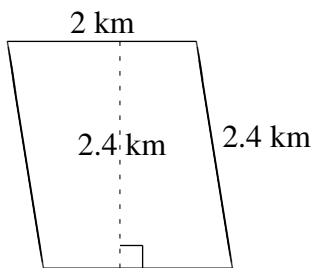
Area and Perimeter of Parallelograms (C)

Find the area and perimeter of each parallelogram.

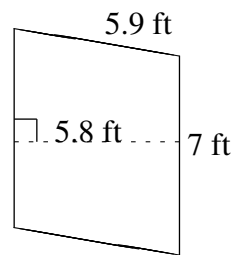


Area and Perimeter of Parallelograms (C) Answers

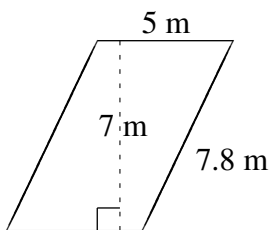
Find the area and perimeter of each parallelogram.



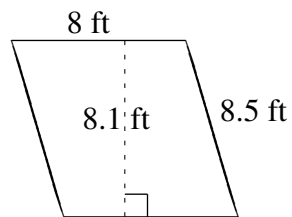
$$A = 4.8 \text{ km}^2$$
$$P = 8.8 \text{ km}$$



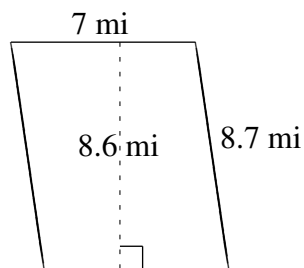
$$A = 40.6 \text{ ft}^2$$
$$P = 25.8 \text{ ft}$$



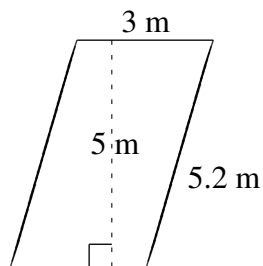
$$A = 35 \text{ m}^2$$
$$P = 25.6 \text{ m}$$



$$A = 64.8 \text{ ft}^2$$
$$P = 33.0 \text{ ft}$$



$$A = 60.2 \text{ mi}^2$$
$$P = 31.4 \text{ mi}$$



$$A = 15 \text{ m}^2$$
$$P = 16.4 \text{ m}$$