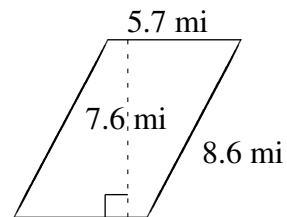
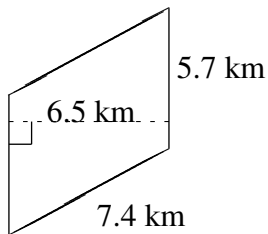
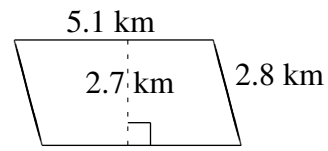
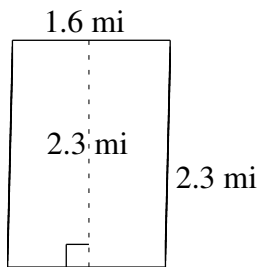
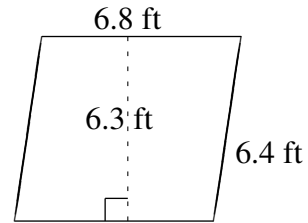
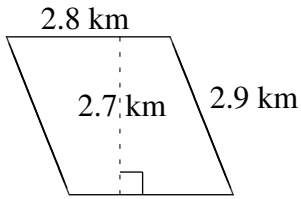


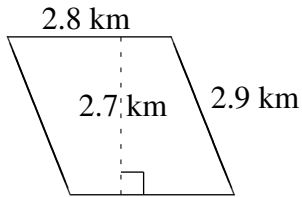
# Area and Perimeter of Parallelograms (F)

Find the area and perimeter of each parallelogram.

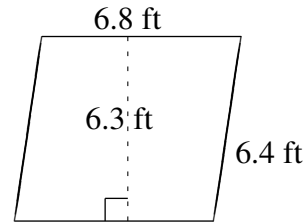


# Area and Perimeter of Parallelograms (F) Answers

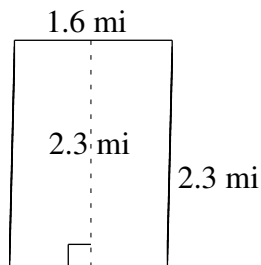
Find the area and perimeter of each parallelogram.



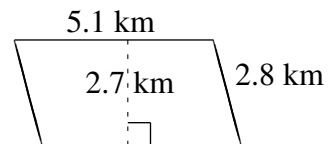
$$A = 7.56 \text{ km}^2$$
$$P = 11.4 \text{ km}$$



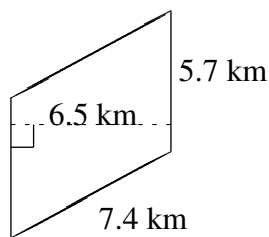
$$A = 42.84 \text{ ft}^2$$
$$P = 26.4 \text{ ft}$$



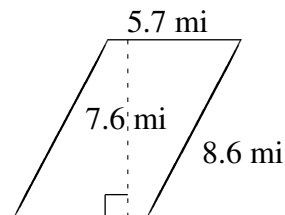
$$A = 3.68 \text{ mi}^2$$
$$P = 7.8 \text{ mi}$$



$$A = 13.77 \text{ km}^2$$
$$P = 15.8 \text{ km}$$



$$A = 37.05 \text{ km}^2$$
$$P = 26.2 \text{ km}$$



$$A = 43.32 \text{ mi}^2$$
$$P = 28.6 \text{ mi}$$