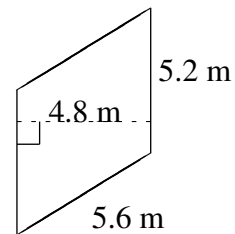
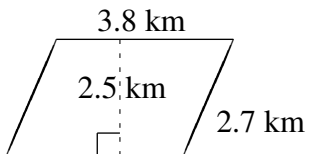
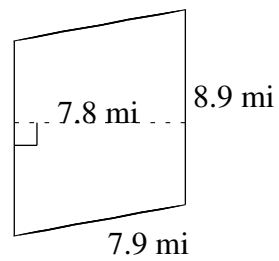
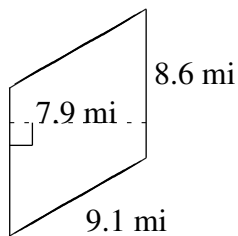
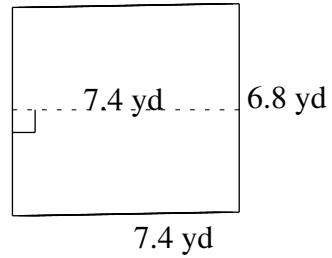
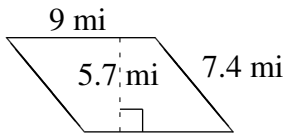


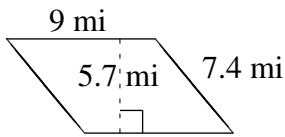
# Area and Perimeter of Parallelograms (H)

Find the area and perimeter of each parallelogram.

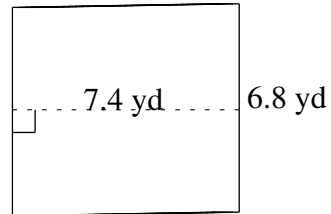


# Area and Perimeter of Parallelograms (H) Answers

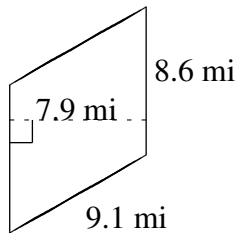
Find the area and perimeter of each parallelogram.



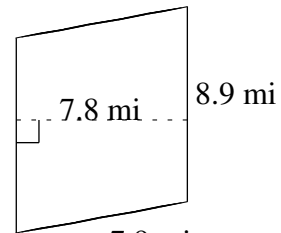
$$A = 51.3 \text{ mi}^2$$
$$P = 32.8 \text{ mi}$$



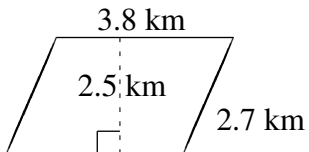
$$A = 50.32 \text{ yd}^2$$
$$P = 28.4 \text{ yd}$$



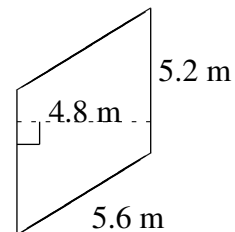
$$A = 67.94 \text{ mi}^2$$
$$P = 35.4 \text{ mi}$$



$$A = 69.42 \text{ mi}^2$$
$$P = 33.6 \text{ mi}$$



$$A = 9.50 \text{ km}^2$$
$$P = 13.0 \text{ km}$$



$$A = 24.96 \text{ m}^2$$
$$P = 21.6 \text{ m}$$