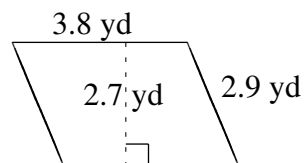
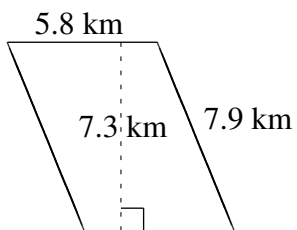
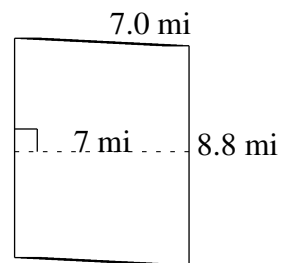
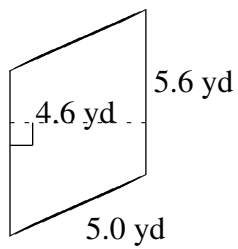
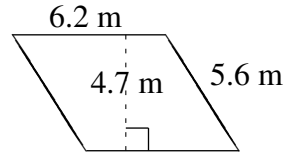
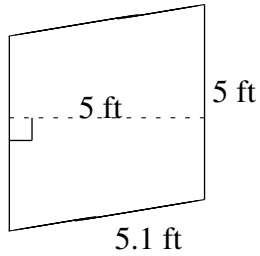


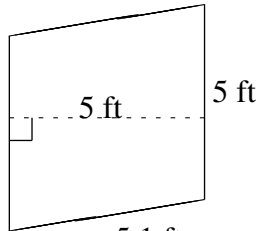
Area and Perimeter of Parallelograms (J)

Find the area and perimeter of each parallelogram.

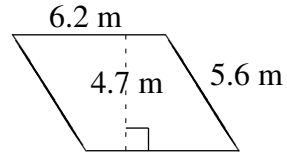


Area and Perimeter of Parallelograms (J) Answers

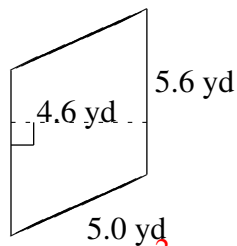
Find the area and perimeter of each parallelogram.



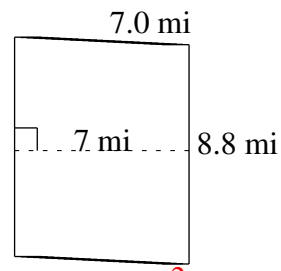
$$A = 25.5 \text{ ft}^2$$
$$P = 20.2 \text{ ft}$$



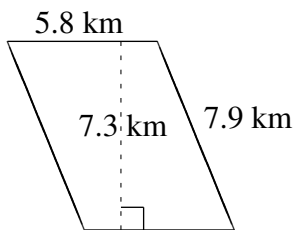
$$A = 29.14 \text{ m}^2$$
$$P = 23.6 \text{ m}$$



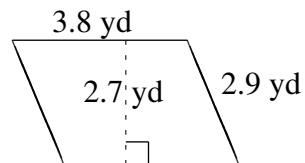
$$A = 25.76 \text{ yd}^2$$
$$P = 21.2 \text{ yd}$$



$$A = 61.6 \text{ mi}^2$$
$$P = 31.6 \text{ mi}$$



$$A = 42.34 \text{ km}^2$$
$$P = 27.4 \text{ km}$$



$$A = 10.26 \text{ yd}^2$$
$$P = 13.4 \text{ yd}$$