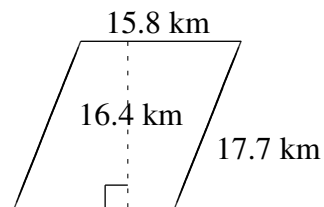
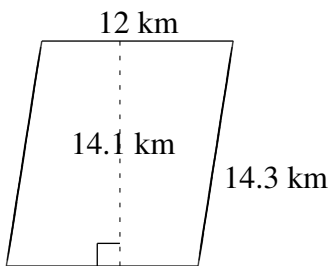
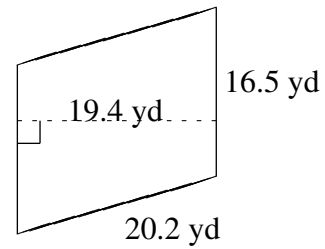
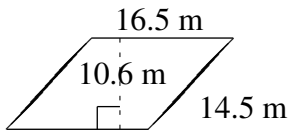
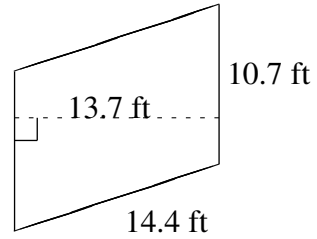
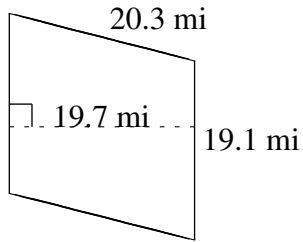


Area and Perimeter of Parallelograms (B)

Find the area and perimeter of each parallelogram.



Area and Perimeter of Parallelograms (B) Answers

Find the area and perimeter of each parallelogram.

