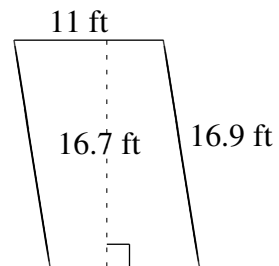
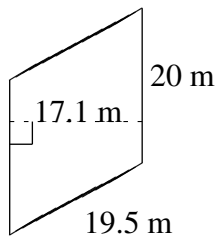
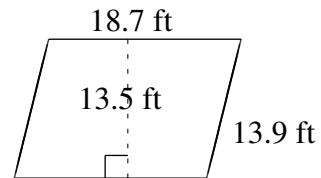
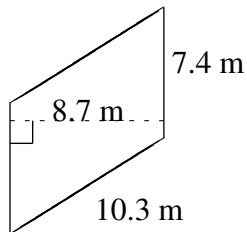
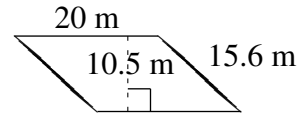
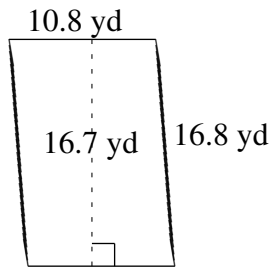


# Area and Perimeter of Parallelograms (F)

Find the area and perimeter of each parallelogram.



# Area and Perimeter of Parallelograms (F) Answers

Find the area and perimeter of each parallelogram.

