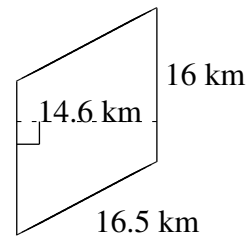
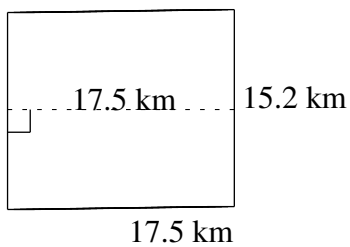
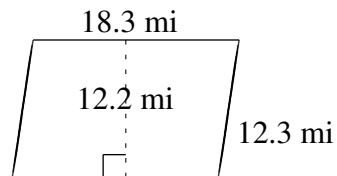
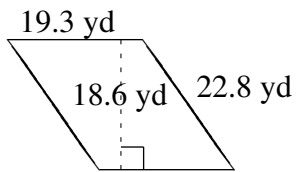
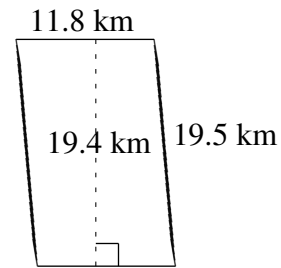
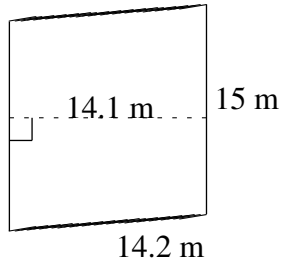


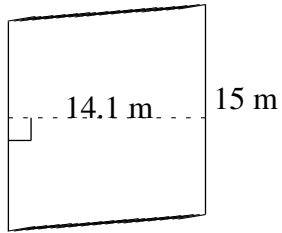
Area and Perimeter of Parallelograms (H)

Find the area and perimeter of each parallelogram.

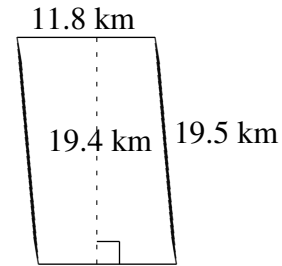


Area and Perimeter of Parallelograms (H) Answers

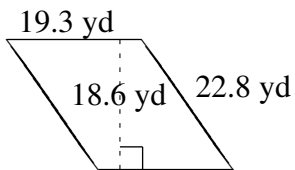
Find the area and perimeter of each parallelogram.



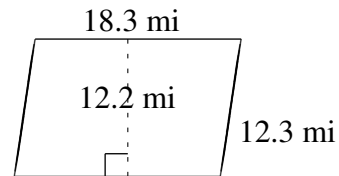
$$A = 211.5 \text{ m}^2$$
$$P = 58.4 \text{ m}$$



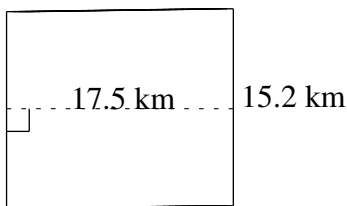
$$A = 228.92 \text{ km}^2$$
$$P = 62.6 \text{ km}$$



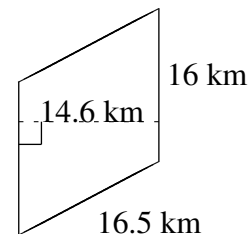
$$A = 358.98 \text{ yd}^2$$
$$P = 84.2 \text{ yd}$$



$$A = 223.26 \text{ mi}^2$$
$$P = 61.2 \text{ mi}$$



$$A = 266.00 \text{ km}^2$$
$$P = 65.4 \text{ km}$$



$$A = 233.6 \text{ km}^2$$
$$P = 65.0 \text{ km}$$