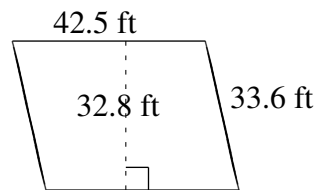
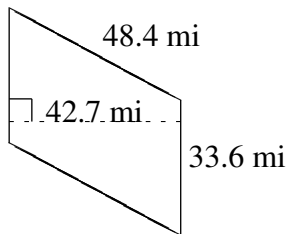
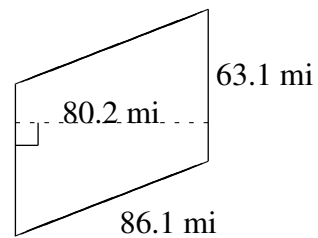
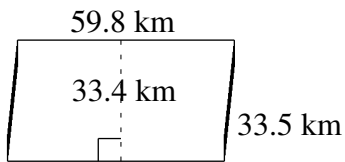
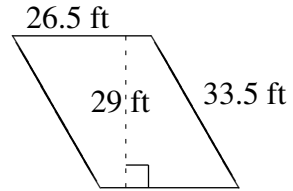
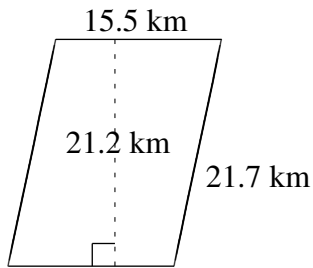


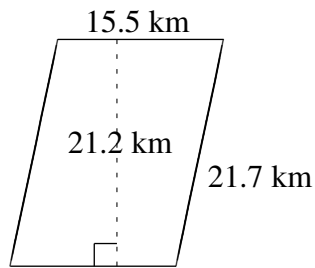
Area and Perimeter of Parallelograms (A)

Find the area and perimeter of each parallelogram.

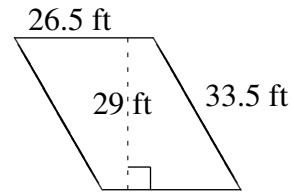


Area and Perimeter of Parallelograms (A) Answers

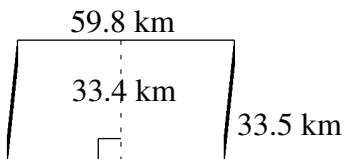
Find the area and perimeter of each parallelogram.



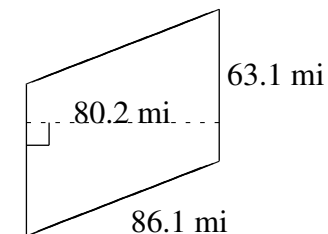
$$A = 328.60 \text{ km}^2$$
$$P = 74.4 \text{ km}$$



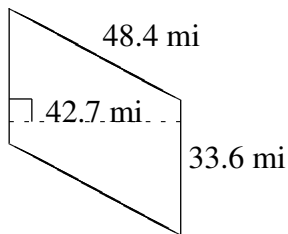
$$A = 768.5 \text{ ft}^2$$
$$P = 120.0 \text{ ft}$$



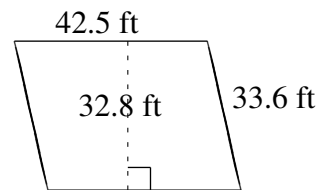
$$A = 1997.32 \text{ km}^2$$
$$P = 186.6 \text{ km}$$



$$A = 5060.62 \text{ mi}^2$$
$$P = 298.4 \text{ mi}$$



$$A = 1434.72 \text{ mi}^2$$
$$P = 164.0 \text{ mi}$$



$$A = 1394.00 \text{ ft}^2$$
$$P = 152.2 \text{ ft}$$