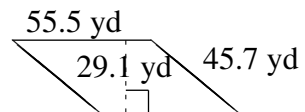
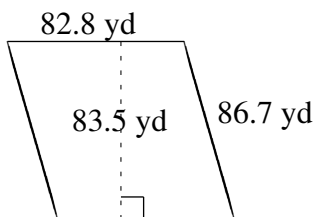
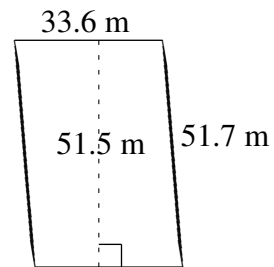
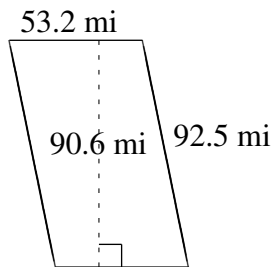
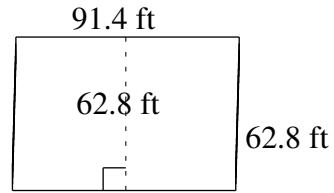
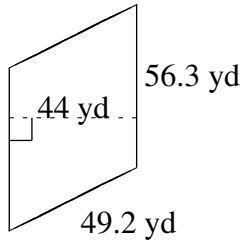


Area and Perimeter of Parallelograms (C)

Find the area and perimeter of each parallelogram.



Area and Perimeter of Parallelograms (C) Answers

Find the area and perimeter of each parallelogram.

