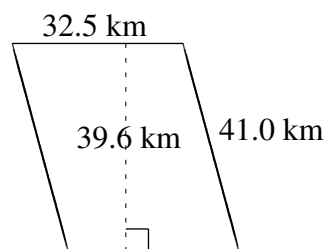
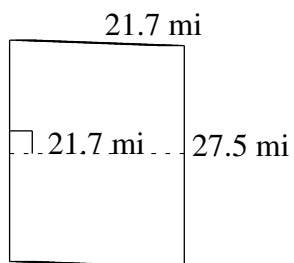
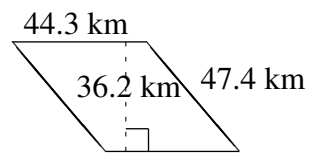
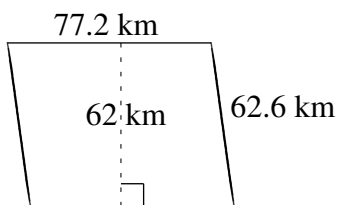
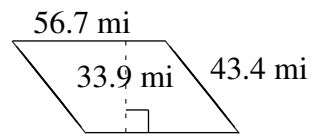
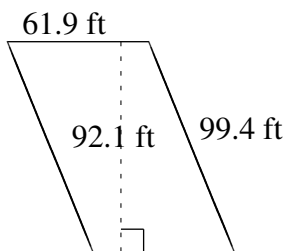


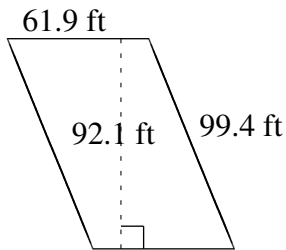
Area and Perimeter of Parallelograms (J)

Find the area and perimeter of each parallelogram.

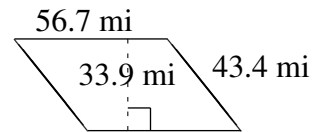


Area and Perimeter of Parallelograms (J) Answers

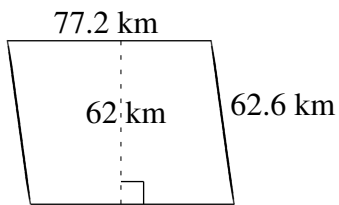
Find the area and perimeter of each parallelogram.



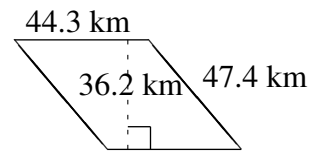
$$A = 5700.99 \text{ ft}^2$$
$$P = 322.6 \text{ ft}$$



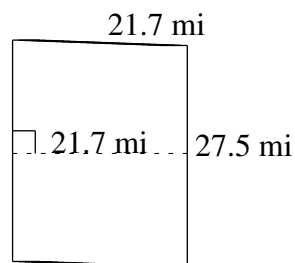
$$A = 1922.13 \text{ mi}^2$$
$$P = 200.2 \text{ mi}$$



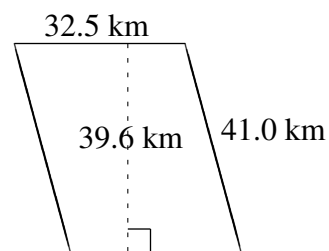
$$A = 4786.4 \text{ km}^2$$
$$P = 279.6 \text{ km}$$



$$A = 1603.66 \text{ km}^2$$
$$P = 183.4 \text{ km}$$



$$A = 596.75 \text{ mi}^2$$
$$P = 98.4 \text{ mi}$$



$$A = 1287.00 \text{ km}^2$$
$$P = 147.0 \text{ km}$$