
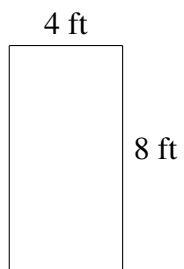
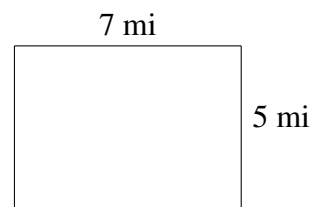
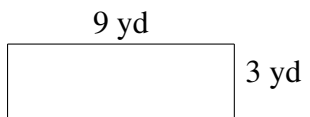
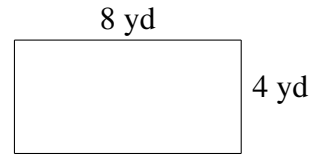



## Area and Perimeter of Rectangles (C)

Find the area and perimeter of each rectangle.



## Area and Perimeter of Rectangles (C) Answers

Find the area and perimeter of each rectangle.

