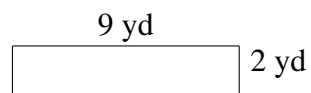
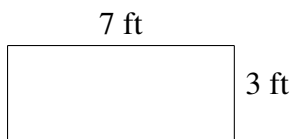
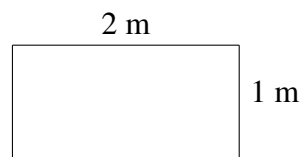
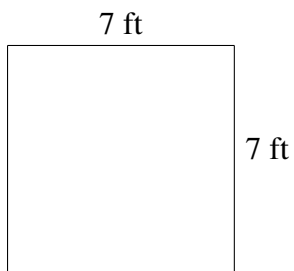
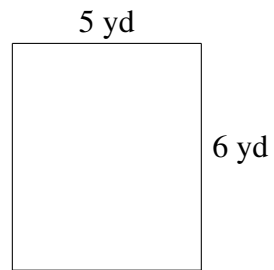



Area and Perimeter of Rectangles (G)

Find the area and perimeter of each rectangle.



Area and Perimeter of Rectangles (G) Answers

Find the area and perimeter of each rectangle.

