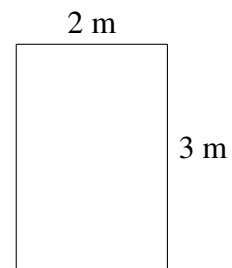
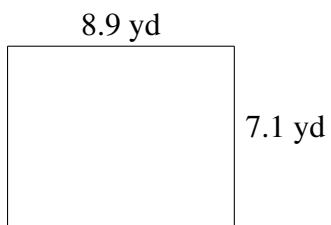
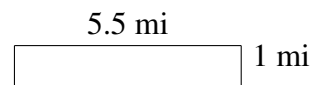
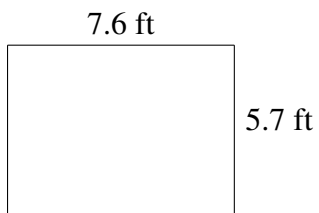
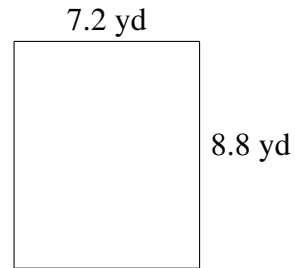
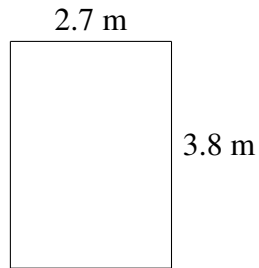


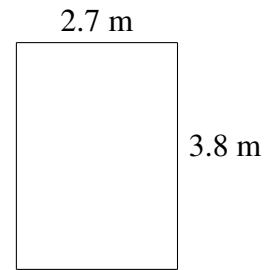
## Area and Perimeter of Rectangles (A)

Find the area and perimeter of each rectangle.

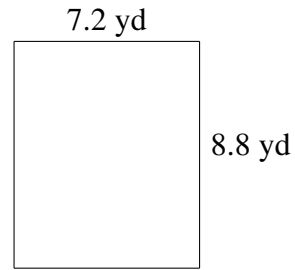


## Area and Perimeter of Rectangles (A) Answers

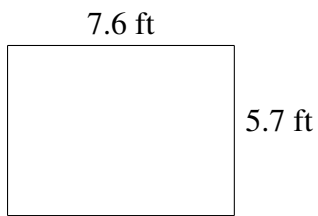
Find the area and perimeter of each rectangle.



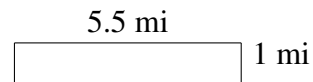
$$A = 10.26 \text{ m}^2$$
$$P = 13.0 \text{ m}$$




$$A = 63.36 \text{ yd}^2$$
$$P = 32.0 \text{ yd}$$



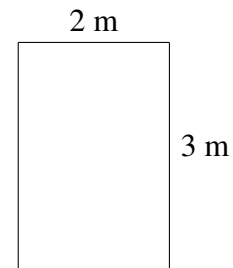
$$A = 43.32 \text{ ft}^2$$
$$P = 26.6 \text{ ft}$$



$$A = 5.5 \text{ mi}^2$$
$$P = 13.0 \text{ mi}$$



$$A = 63.19 \text{ yd}^2$$
$$P = 32.0 \text{ yd}$$



$$A = 6 \text{ m}^2$$
$$P = 10 \text{ m}$$