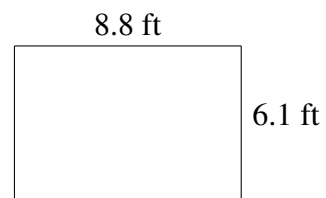
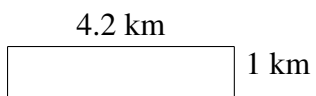
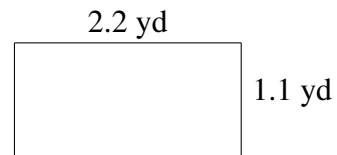
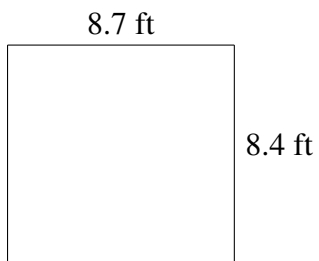
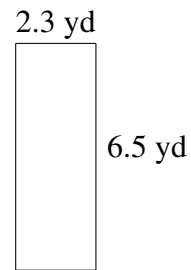
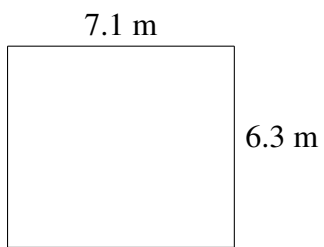



Area and Perimeter of Rectangles (E)

Find the area and perimeter of each rectangle.

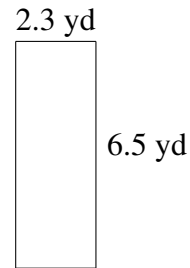


Area and Perimeter of Rectangles (E) Answers

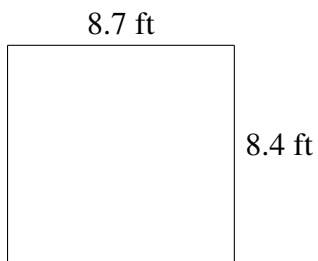
Find the area and perimeter of each rectangle.



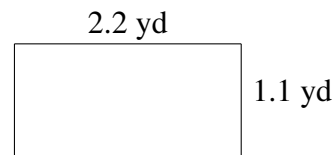
$$A = 44.73 \text{ m}^2$$
$$P = 26.8 \text{ m}$$



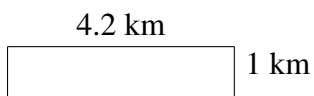
$$A = 14.95 \text{ yd}^2$$
$$P = 17.6 \text{ yd}$$



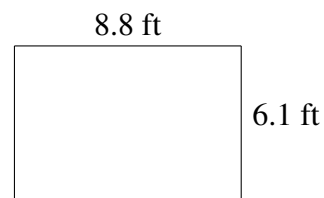
$$A = 73.08 \text{ ft}^2$$
$$P = 34.2 \text{ ft}$$



$$A = 2.42 \text{ yd}^2$$
$$P = 6.6 \text{ yd}$$



$$A = 4.2 \text{ km}^2$$
$$P = 10.4 \text{ km}$$



$$A = 53.68 \text{ ft}^2$$
$$P = 29.8 \text{ ft}$$