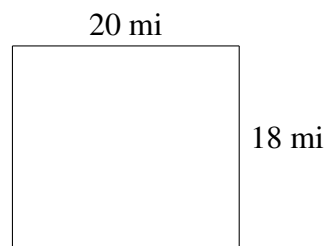
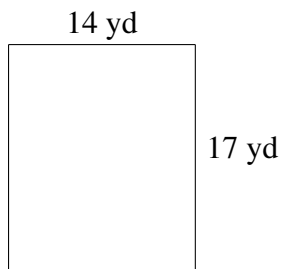
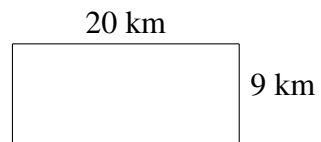
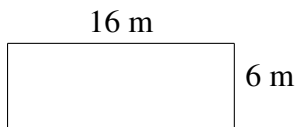
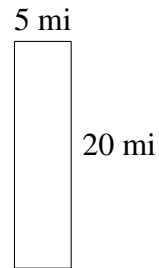
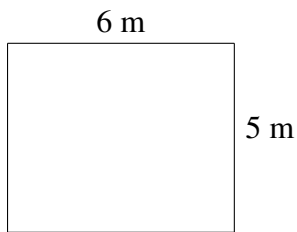


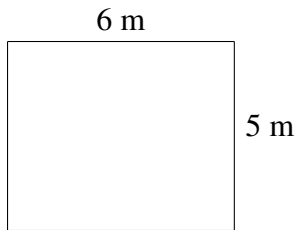
Area and Perimeter of Rectangles (A)

Find the area and perimeter of each rectangle.




Area and Perimeter of Rectangles (A) Answers

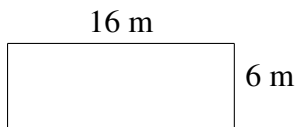
Find the area and perimeter of each rectangle.



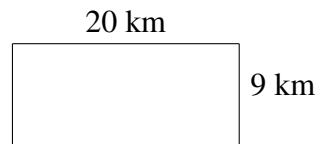
$$A = 30 \text{ m}^2$$
$$P = 22 \text{ m}$$



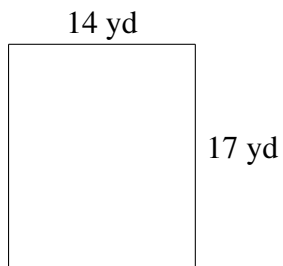
$$A = 100 \text{ mi}^2$$
$$P = 50 \text{ mi}$$



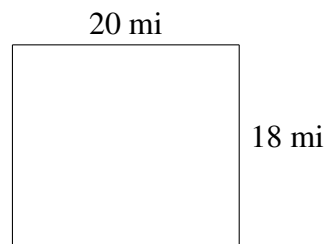
$$A = 96 \text{ m}^2$$
$$P = 44 \text{ m}$$



$$A = 180 \text{ km}^2$$
$$P = 58 \text{ km}$$



$$A = 238 \text{ yd}^2$$
$$P = 62 \text{ yd}$$



$$A = 360 \text{ mi}^2$$
$$P = 76 \text{ mi}$$