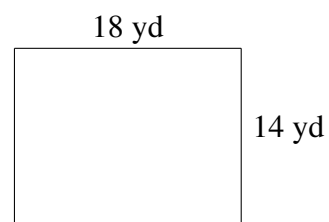
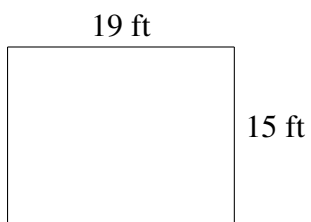

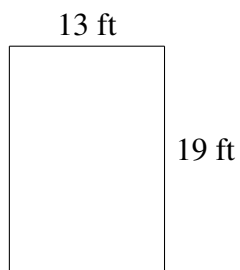
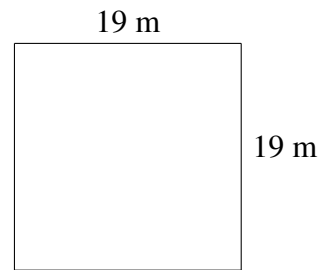
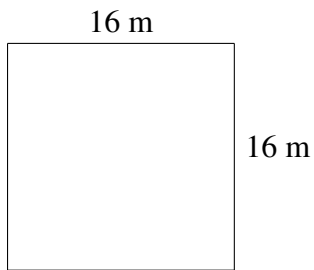


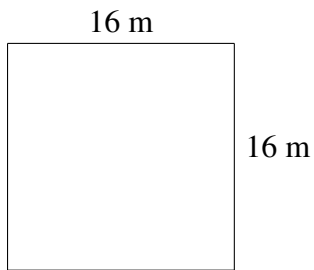
Area and Perimeter of Rectangles (B)

Find the area and perimeter of each rectangle.

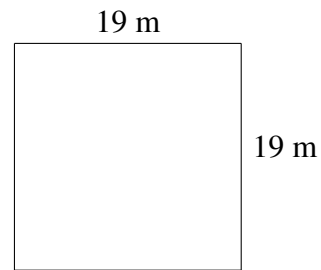


Area and Perimeter of Rectangles (B) Answers

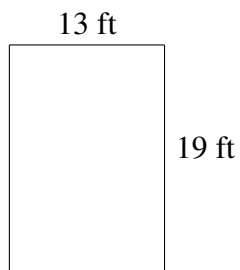
Find the area and perimeter of each rectangle.




$$A = 256 \text{ m}^2$$
$$P = 64 \text{ m}$$



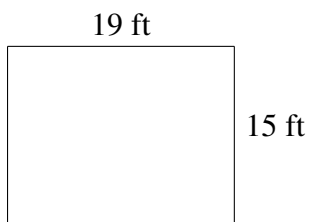
$$A = 361 \text{ m}^2$$
$$P = 76 \text{ m}$$



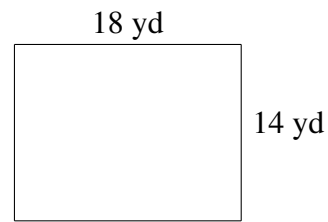
$$A = 247 \text{ ft}^2$$
$$P = 64 \text{ ft}$$



$$A = 190 \text{ km}^2$$
$$P = 58 \text{ km}$$



$$A = 285 \text{ ft}^2$$
$$P = 68 \text{ ft}$$



$$A = 252 \text{ yd}^2$$
$$P = 64 \text{ yd}$$