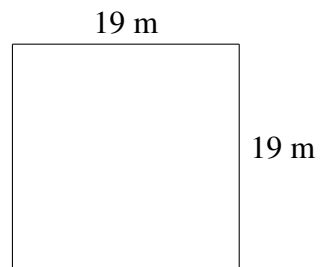
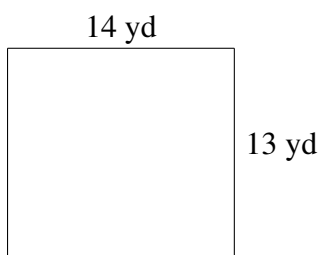
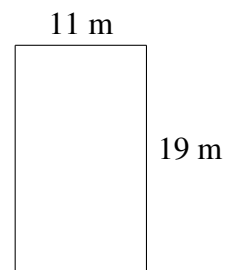
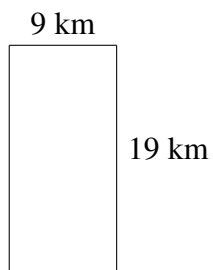
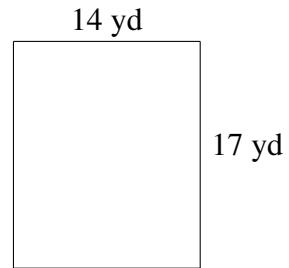
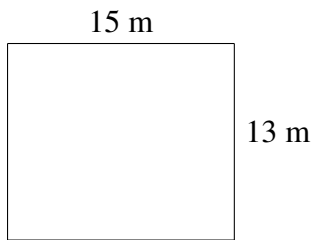


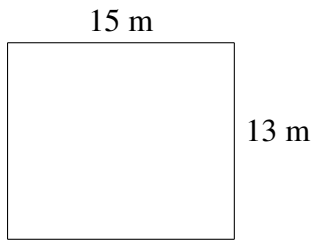
## Area and Perimeter of Rectangles (D)

Find the area and perimeter of each rectangle.

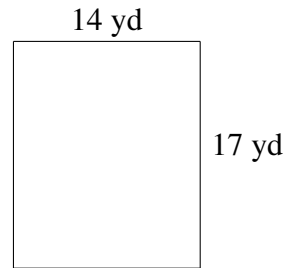


## Area and Perimeter of Rectangles (D) Answers

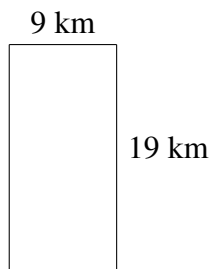
Find the area and perimeter of each rectangle.



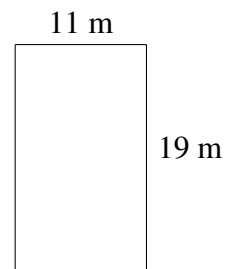
$$A = 195 \text{ m}^2$$
$$P = 56 \text{ m}$$



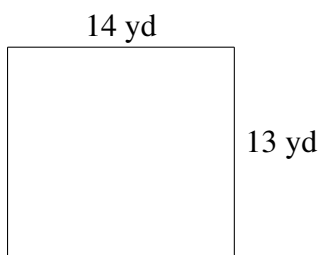
$$A = 238 \text{ yd}^2$$
$$P = 62 \text{ yd}$$



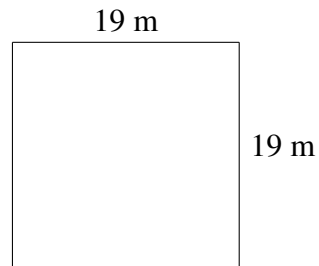
$$A = 171 \text{ km}^2$$
$$P = 56 \text{ km}$$



$$A = 209 \text{ m}^2$$
$$P = 60 \text{ m}$$



$$A = 182 \text{ yd}^2$$
$$P = 54 \text{ yd}$$



$$A = 361 \text{ m}^2$$
$$P = 76 \text{ m}$$