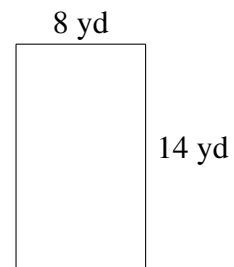
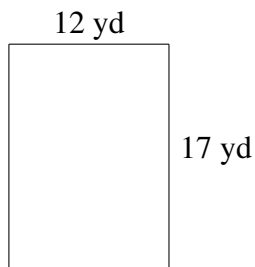
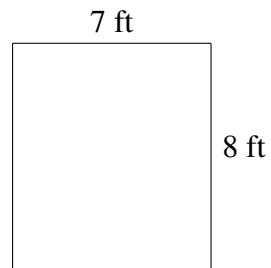
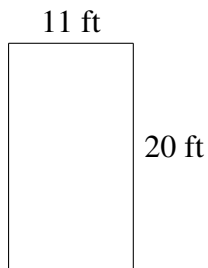
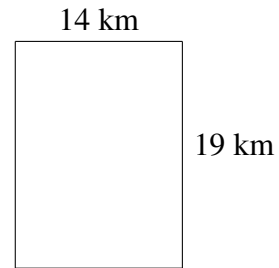
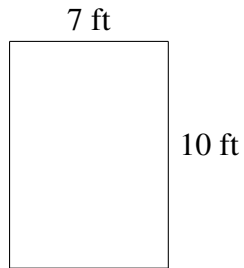


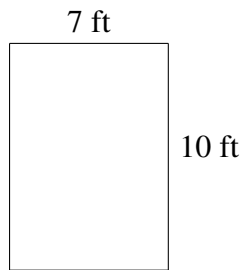
## Area and Perimeter of Rectangles (G)

Find the area and perimeter of each rectangle.

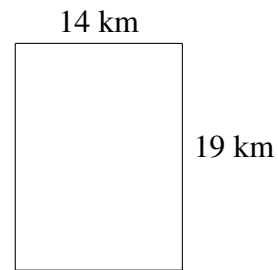


## Area and Perimeter of Rectangles (G) Answers

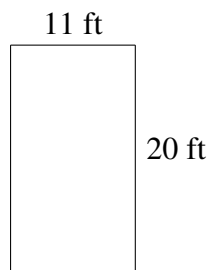
Find the area and perimeter of each rectangle.



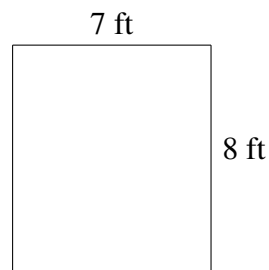
$$A = 70 \text{ ft}^2$$
$$P = 34 \text{ ft}$$



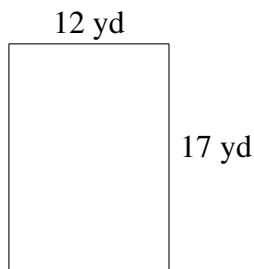
$$A = 266 \text{ km}^2$$
$$P = 66 \text{ km}$$



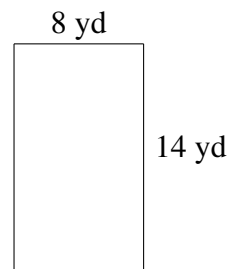
$$A = 220 \text{ ft}^2$$
$$P = 62 \text{ ft}$$



$$A = 56 \text{ ft}^2$$
$$P = 30 \text{ ft}$$



$$A = 204 \text{ yd}^2$$
$$P = 58 \text{ yd}$$



$$A = 112 \text{ yd}^2$$
$$P = 44 \text{ yd}$$