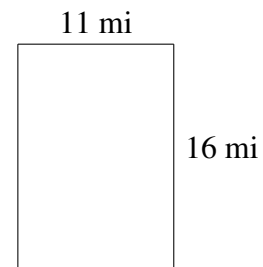
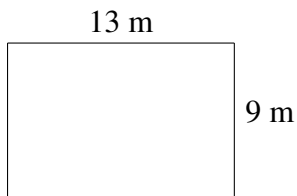
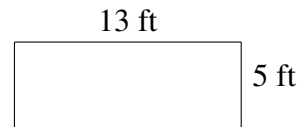
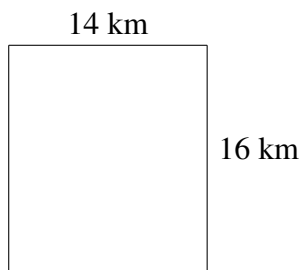
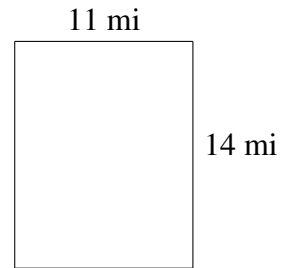
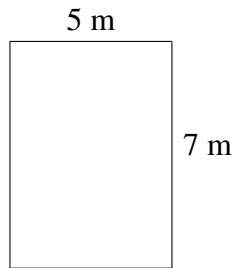


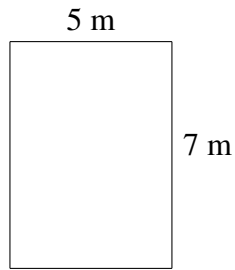
Area and Perimeter of Rectangles (I)

Find the area and perimeter of each rectangle.

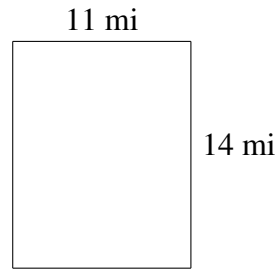


Area and Perimeter of Rectangles (I) Answers

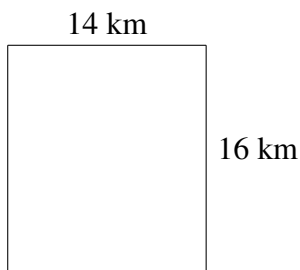
Find the area and perimeter of each rectangle.



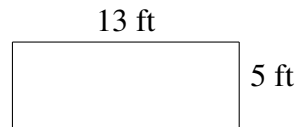
$$A = 35 \text{ m}^2$$
$$P = 24 \text{ m}$$



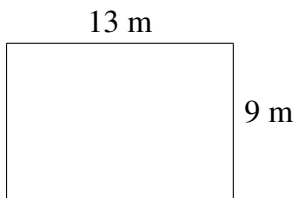
$$A = 154 \text{ mi}^2$$
$$P = 50 \text{ mi}$$



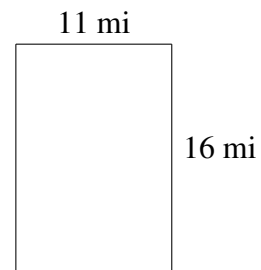
$$A = 224 \text{ km}^2$$
$$P = 60 \text{ km}$$



$$A = 65 \text{ ft}^2$$
$$P = 36 \text{ ft}$$



$$A = 117 \text{ m}^2$$
$$P = 44 \text{ m}$$



$$A = 176 \text{ mi}^2$$
$$P = 54 \text{ mi}$$