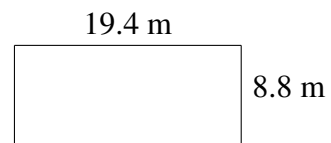
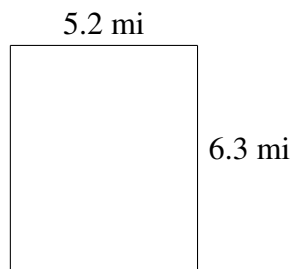
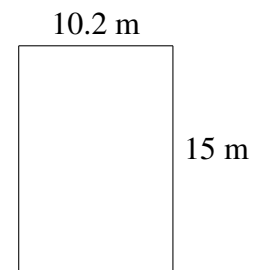
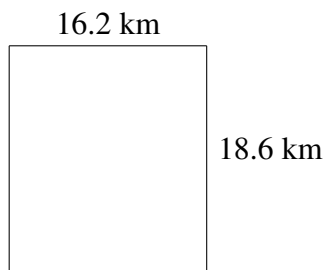
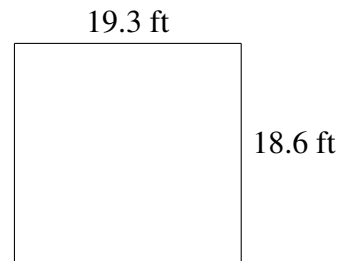
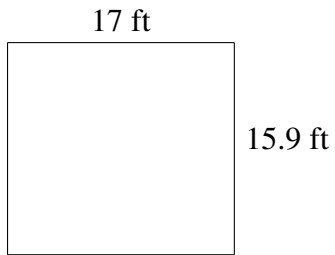


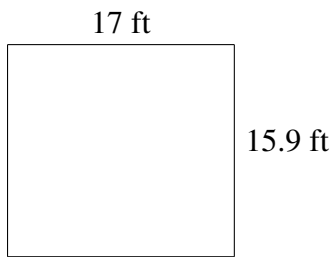
Area and Perimeter of Rectangles (G)

Find the area and perimeter of each rectangle.

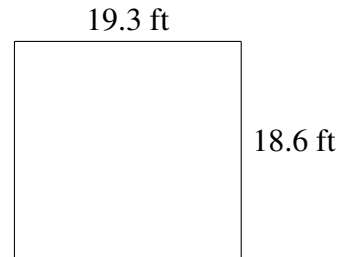


Area and Perimeter of Rectangles (G) Answers


Find the area and perimeter of each rectangle.



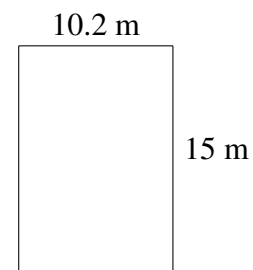
$$A = 270.3 \text{ ft}^2$$
$$P = 65.8 \text{ ft}$$



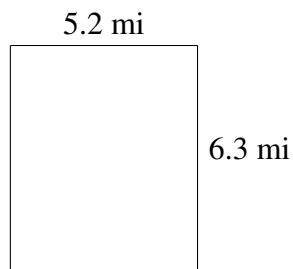
$$A = 358.98 \text{ ft}^2$$
$$P = 75.8 \text{ ft}$$



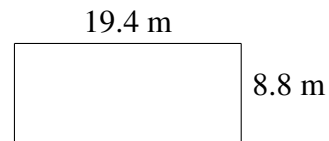
$$A = 301.32 \text{ km}^2$$
$$P = 69.6 \text{ km}$$



$$A = 153.0 \text{ m}^2$$
$$P = 50.4 \text{ m}$$



$$A = 32.76 \text{ mi}^2$$
$$P = 23.0 \text{ mi}$$



$$A = 170.72 \text{ m}^2$$
$$P = 56.4 \text{ m}$$