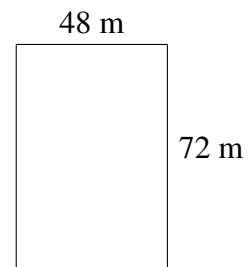
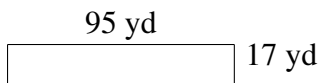
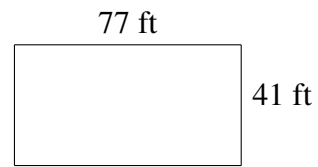
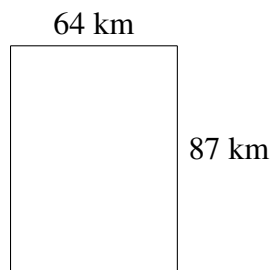
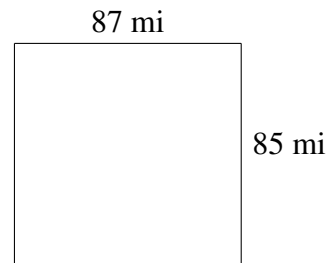
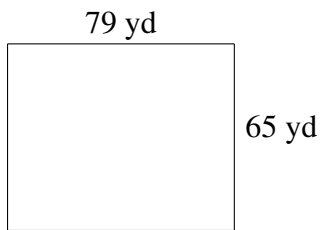


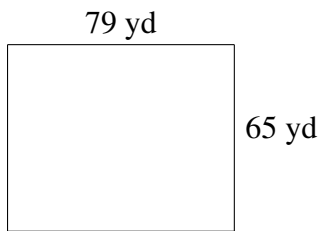
Area and Perimeter of Rectangles (D)

Find the area and perimeter of each rectangle.

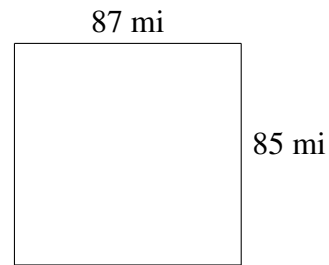


Area and Perimeter of Rectangles (D) Answers

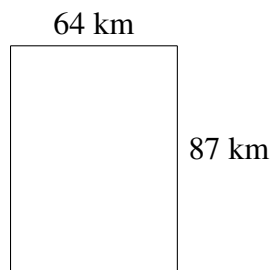
Find the area and perimeter of each rectangle.



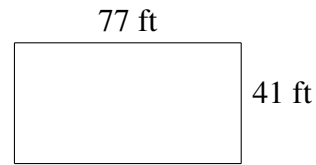
$$A = 5135 \text{ yd}^2$$
$$P = 288 \text{ yd}$$



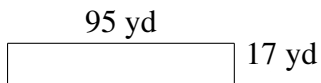
$$A = 7395 \text{ mi}^2$$
$$P = 344 \text{ mi}$$



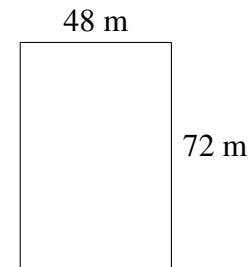
$$A = 5568 \text{ km}^2$$
$$P = 302 \text{ km}$$



$$A = 3157 \text{ ft}^2$$
$$P = 236 \text{ ft}$$



$$A = 1615 \text{ yd}^2$$
$$P = 224 \text{ yd}$$



$$A = 3456 \text{ m}^2$$
$$P = 240 \text{ m}$$