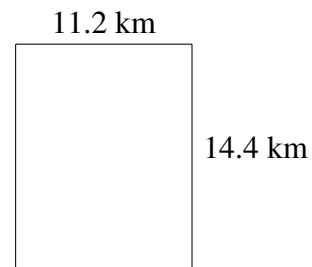
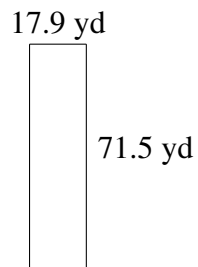
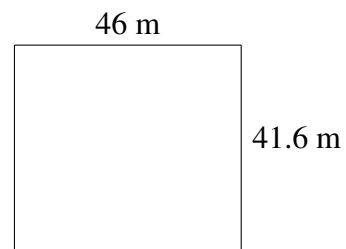
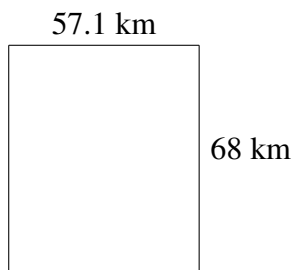
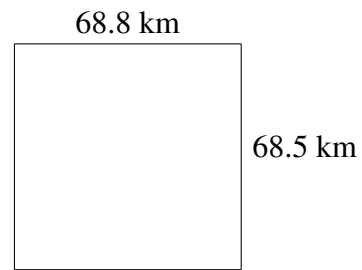
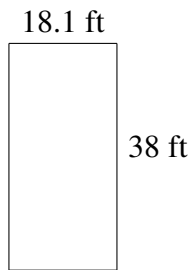



Area and Perimeter of Rectangles (E)

Find the area and perimeter of each rectangle.

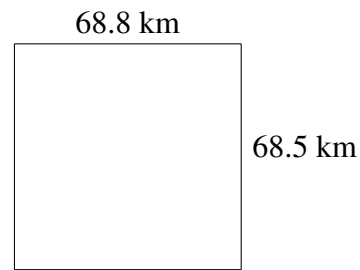


Area and Perimeter of Rectangles (E) Answers

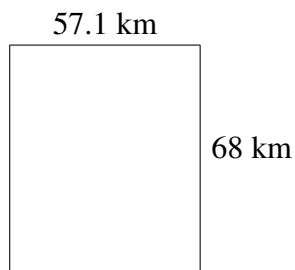
Find the area and perimeter of each rectangle.



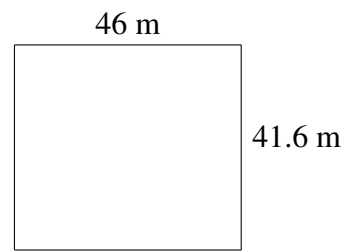
$$A = 687.8 \text{ ft}^2$$
$$P = 112.2 \text{ ft}$$



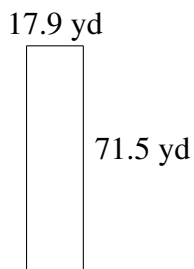
$$A = 4712.80 \text{ km}^2$$
$$P = 274.6 \text{ km}$$



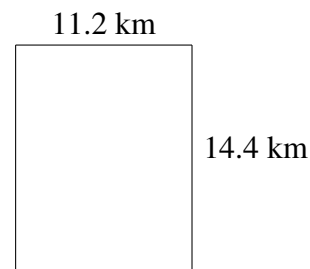
$$A = 3882.8 \text{ km}^2$$
$$P = 250.2 \text{ km}$$



$$A = 1913.6 \text{ m}^2$$
$$P = 175.2 \text{ m}$$



$$A = 1279.85 \text{ yd}^2$$
$$P = 178.8 \text{ yd}$$



$$A = 161.28 \text{ km}^2$$
$$P = 51.2 \text{ km}$$