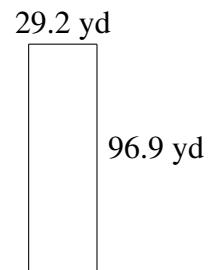
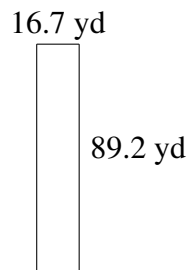
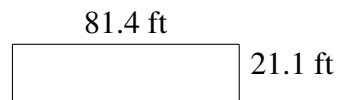
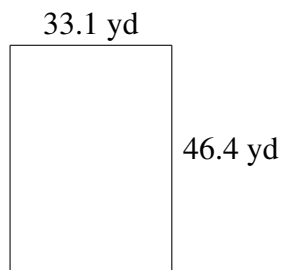
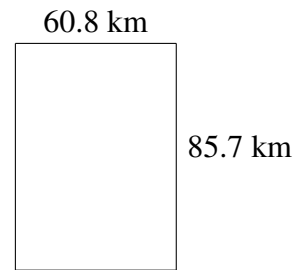
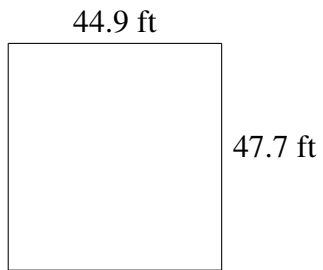


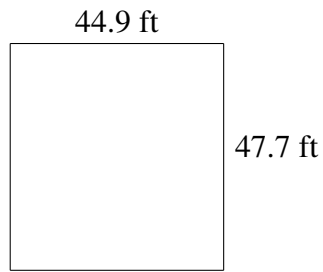
Area and Perimeter of Rectangles (H)

Find the area and perimeter of each rectangle.

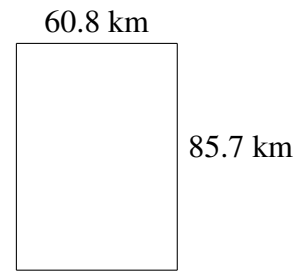


Area and Perimeter of Rectangles (H) Answers

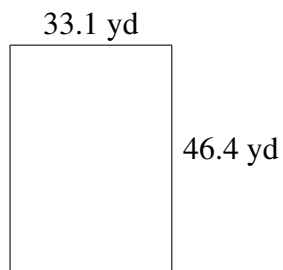
Find the area and perimeter of each rectangle.



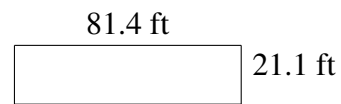
$$A = 2141.73 \text{ ft}^2$$
$$P = 185.2 \text{ ft}$$



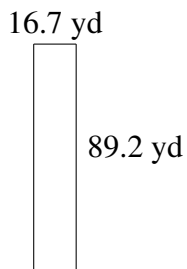
$$A = 5210.56 \text{ km}^2$$
$$P = 293.0 \text{ km}$$



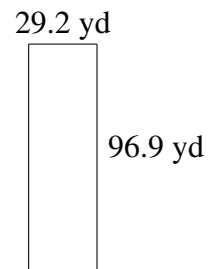
$$A = 1535.84 \text{ yd}^2$$
$$P = 159.0 \text{ yd}$$



$$A = 1717.54 \text{ ft}^2$$
$$P = 205.0 \text{ ft}$$



$$A = 1489.64 \text{ yd}^2$$
$$P = 211.8 \text{ yd}$$



$$A = 2829.48 \text{ yd}^2$$
$$P = 252.2 \text{ yd}$$