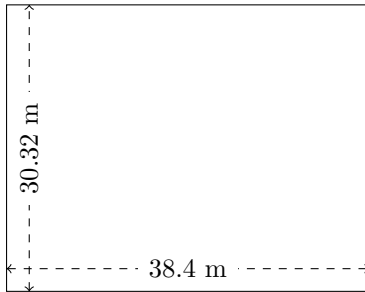


Perimeter and Area of Rectangles (C)

Calculate the perimeter and area for each rectangle.

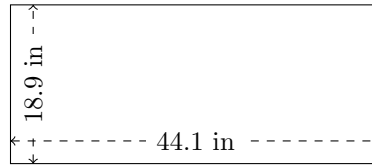
1.



$$P = ?$$

$$A = ?$$

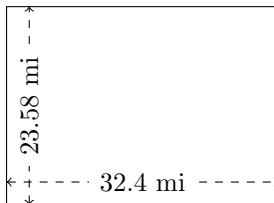
2.



$$P = ?$$

$$A = ?$$

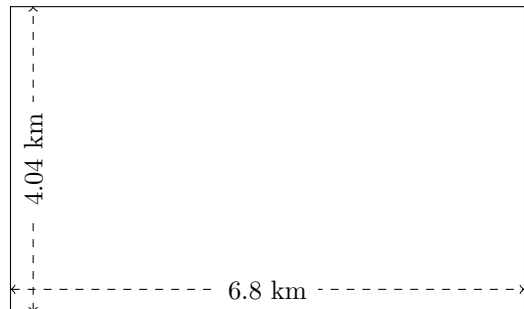
3.



$$P = ?$$

$$A = ?$$

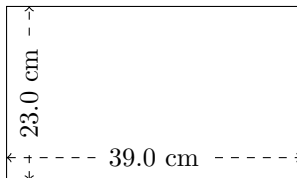
4.



$$P = ?$$

$$A = ?$$


5.



$$P = ?$$

$$A = ?$$

6.



$$P = ?$$

$$A = ?$$