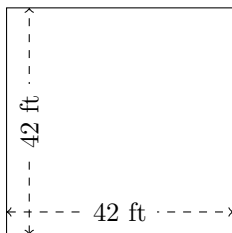


Perimeter and Area of Rectangles (F)

Calculate the perimeter and area for each rectangle.

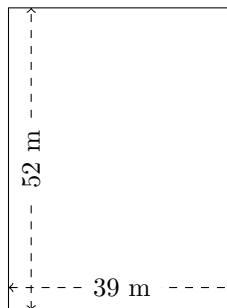
1.



$$P = ?$$

$$A = ?$$

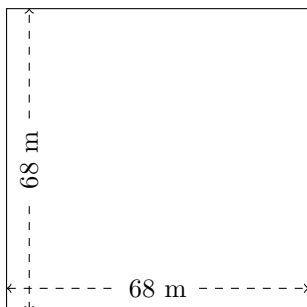
2.



$$P = ?$$

$$A = ?$$

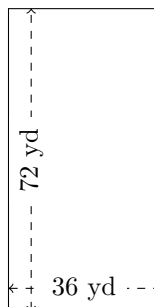
3.



$$P = ?$$

$$A = ?$$

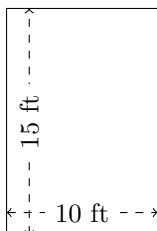
4.



$$P = ?$$

$$A = ?$$

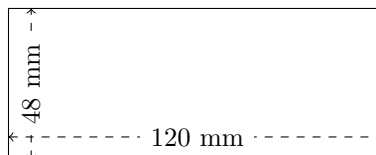
5.



$$P = ?$$

$$A = ?$$

6.



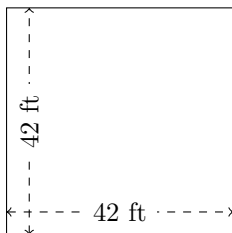
$$P = ?$$

$$A = ?$$

Perimeter and Area of Rectangles (F) Answers

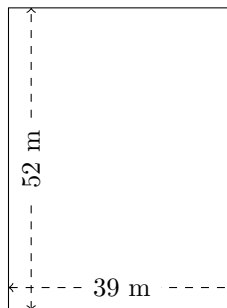
Calculate the perimeter and area for each rectangle.

1.



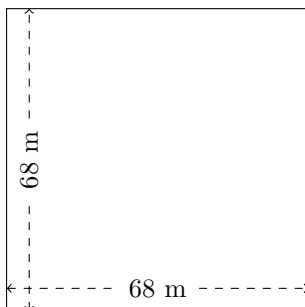
$$P = 168 \text{ ft}$$
$$A = 1764 \text{ ft}^2$$

2.



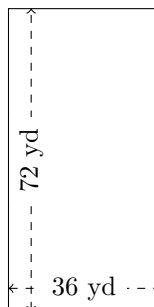
$$P = 182 \text{ m}$$
$$A = 2028 \text{ m}^2$$

3.



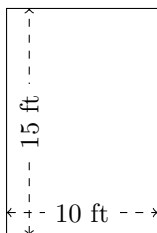
$$P = 272 \text{ m}$$
$$A = 4624 \text{ m}^2$$

4.



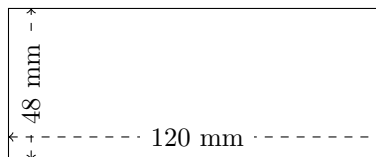
$$P = 216 \text{ yd}$$
$$A = 2592 \text{ yd}^2$$

5.



$$P = 50 \text{ ft}$$
$$A = 150 \text{ ft}^2$$

6.



$$P = 336 \text{ mm}$$
$$A = 5760 \text{ mm}^2$$