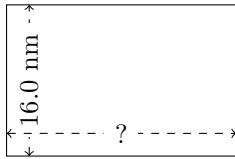


# Rectangle Measurements (A)

Calculate the missing measurements for each rectangle.

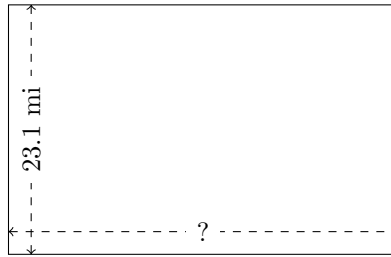
1.



$$P = 80.64 \text{ nm}$$

$$A = ?$$


2.



$$P = 118.3 \text{ mi}$$

$$A = ?$$


3.



$$P = 134.82 \text{ yd}$$

$$A = ?$$


4.



$$P = 28 \text{ mm}$$

$$A = ?$$

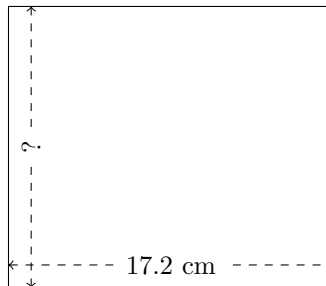
5.



$$P = 93.6 \text{ km}$$

$$A = ?$$

6.



$$P = 64.16 \text{ cm}$$

$$A = ?$$