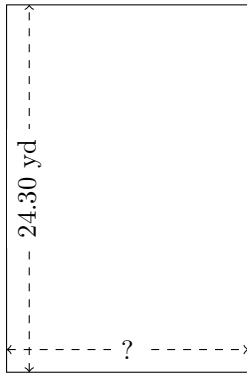


Rectangle Measurements (D)

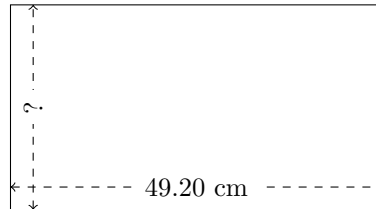
Calculate the missing measurements for each rectangle.

1.



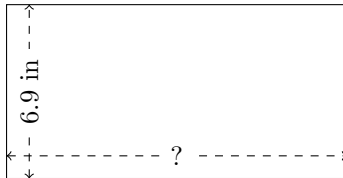
$$P = 80.6 \text{ yd}$$
$$A = ?$$

2.



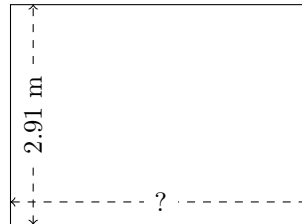
$$P = 152.6 \text{ cm}$$
$$A = ?$$

3.



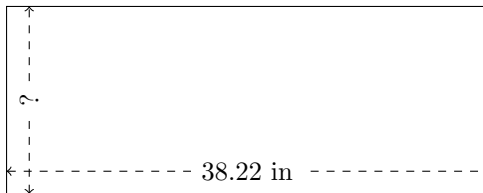
$$P = 40.8 \text{ in}$$
$$A = ?$$

4.




$$P = 13.78 \text{ m}$$
$$A = ?$$

5.



$$P = 106.2 \text{ in}$$
$$A = ?$$

6.



$$P = 90 \text{ AU}$$
$$A = ?$$