


Rectangle Measurements (F)

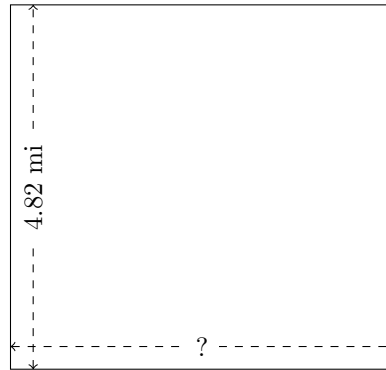
Calculate the missing measurements for each rectangle.

1.



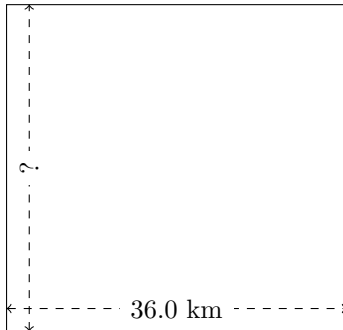
$$P = 209 \text{ AU}$$
$$A = ?$$

2.



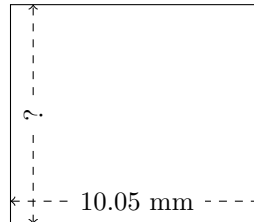
$$P = 19.78 \text{ mi}$$
$$A = ?$$

3.



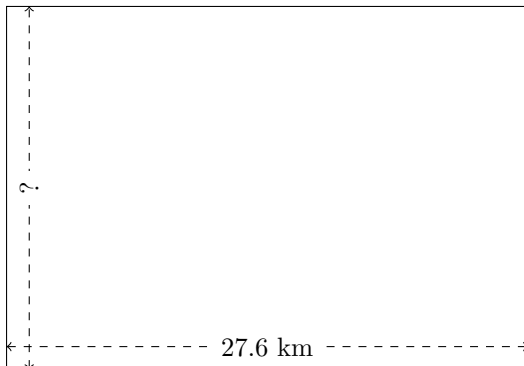
$$P = 141.12 \text{ km}$$
$$A = ?$$

4.



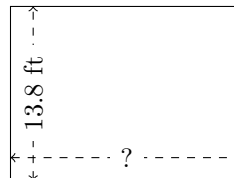
$$P = 37.5 \text{ mm}$$
$$A = ?$$

5.



$$P = 93.6 \text{ km}$$
$$A = ?$$

6.



$$P = 64.56 \text{ ft}$$
$$A = ?$$